


Grade 1 Addition and Subtraction Word Problems

Name: _____ Class: _____

Question 1

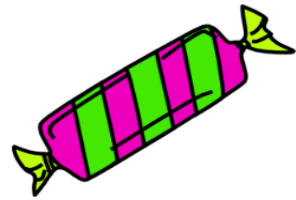
There are 7 red apples. There are 8 green apples.
How many apples are there **altogether**?



There are _____ red apples. There are _____ green apples.
How many apples are there altogether?

Question 2

I have 12 candies. I buy 3 **more** candies.
How many candies do I have now?



I have _____ candies. I buy _____ more candies.
How many candies do I have now?

Question 3

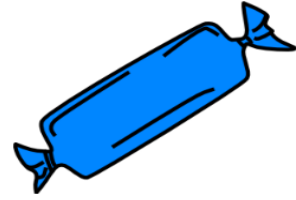
There are 20 students in my class. 15 of them have brown eyes.
How many students **do not** have brown eyes?



There are _____ students in my class. _____ of them have brown eyes.
How many students do not have brown eyes?

Question 4


I had 12 candies. I **ate** 4 of them.
How many candies did I have **left**?



I had _____ candies. I ate _____ of them.
How many candies did I have left?

Question 5

There are 5 blue flowers in a vase. There are 4 **more** red flowers **than** blue flowers in the vase. How many red flowers are there in the vase?



There are _____ blue flowers in a vase. There are _____ more red flowers than blue flowers in the vase. How many red flowers are there in the vase?

Question 6

There are 20 students in my class? 8 **of them** are girls. How many boys are in my class?



There are _____ students in my class? _____ of them are girls. How many boys are in my class?

Answers

Q 1 : 15 apples

Q 4 : 8 candies

Q 2 : 15 candies

Q 5 : 8 red flowers

Q 3 : 5 students

Q 6 : 12 boys