

Name: \_\_\_\_\_ Class: \_\_\_\_\_

**Question 1**


Nancy earns 300\$ per week. She works 40 hours per week.  
How much does she earn per hour?



Nancy earns \_\_\_\_\_\$ per week. She works \_\_\_\_\_ hours per week. How much does she earn per hour?

**Question 2**

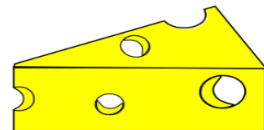
The price of 5 apples and 15 bananas is 8\$. The price of 1 apple is 0.25\$. What is the price of a banana?



The price of \_\_\_\_\_ apples and \_\_\_\_\_ bananas is \_\_\_\_\_\$. The price of 1 apple is \_\_\_\_\_\$. What is the price of a banana?

**Question 3**

Peter bought 5kg of cheese. He made 15 pizzas. He put 0.25kg of cheese on each pizza. How much cheese did he have left?



Peter bought \_\_\_\_\_kg of cheese. He made \_\_\_\_\_ pizzas.  
He put \_\_\_\_\_kg of cheese on each pizza. How much cheese did he have left?

#### Question 4

A monkey weighs 9kg. The monkey is 4 times heavier than a rabbit. The rabbit is 15 times heavier than a bird. What is the mass of the bird?



A monkey weighs \_\_\_\_\_kg. The monkey is \_\_\_\_\_ times heavier than a rabbit. The rabbit is \_\_\_\_\_ times heavier than a bird. What is the mass of the bird?

#### Question 5


The price of 2kg of bananas is 1.80\$  
What is the price of 300 grams of bananas?



The price of \_\_\_\_kg of bananas is \_\_\_\_\_\$  
What is the price of \_\_\_\_\_ grams of bananas?

#### Question 6

The price of 2 pizzas is 7.20\$. The price of 2 hamburgers is 5.40\$. What is the price of 75 pizzas and 120 hamburgers?



The price of \_\_\_\_\_ pizzas is \_\_\_\_\_\$. The price of \_\_\_\_\_ hamburgers is \_\_\_\_\_\$. What is the price of \_\_\_\_\_ pizzas and \_\_\_\_\_ hamburgers?

## Answers

Q 1 : 7.50\$

Q 4 : 150 grams

Q 2 : 0.45\$

Q 5 : 0.27\$

Q 3 : 1 kg 250 g

Q 6 : 594 dollars