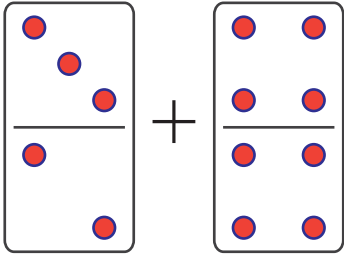


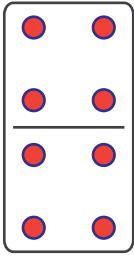
# Count and Add

Name: \_\_\_\_\_ Score: \_\_\_\_\_

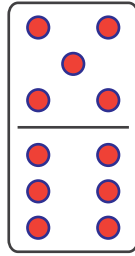
Count and add the dots on the dominoes.



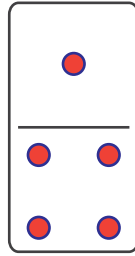
+



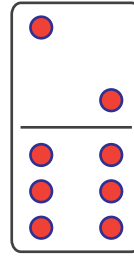
$$\square + \square = \square$$



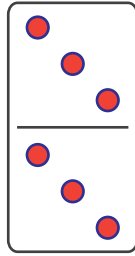
+



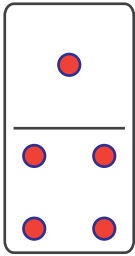
$$\square + \square = \square$$



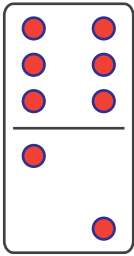
+



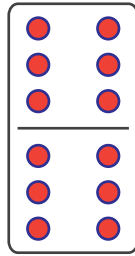
$$\square + \square = \square$$



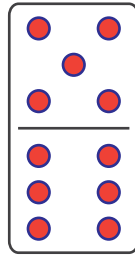
+



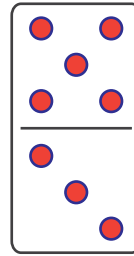
$$\square + \square = \square$$



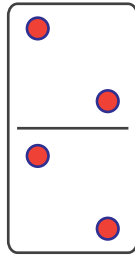
+



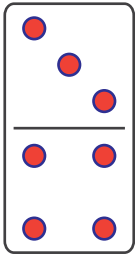
$$\square + \square = \square$$



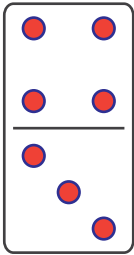
+



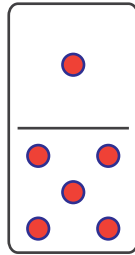
$$\square + \square = \square$$



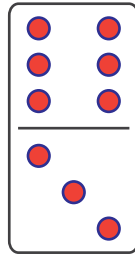
+



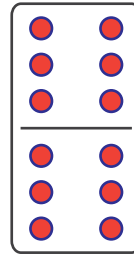
$$\square + \square = \square$$



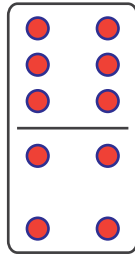
+



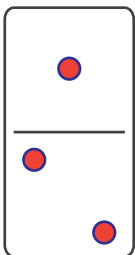
$$\square + \square = \square$$



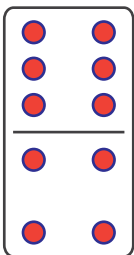
+



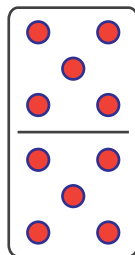
$$\square + \square = \square$$



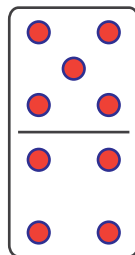
+



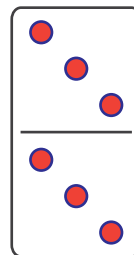
$$\square + \square = \square$$



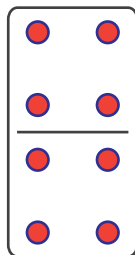
+



$$\square + \square = \square$$



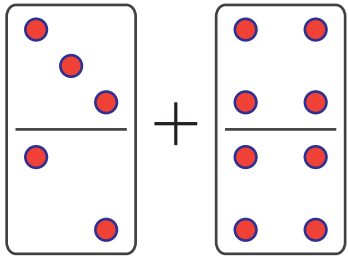
+



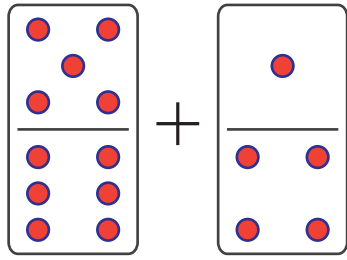
$$\square + \square = \square$$

# Answers

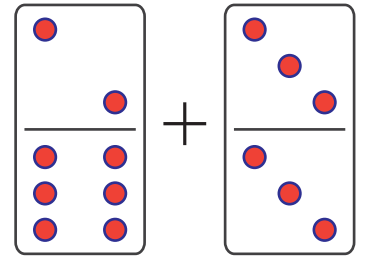
Count and add the dots on the dominoes.



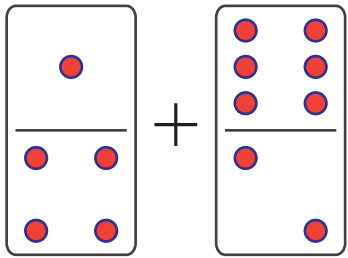
$$5 + 8 = 13$$



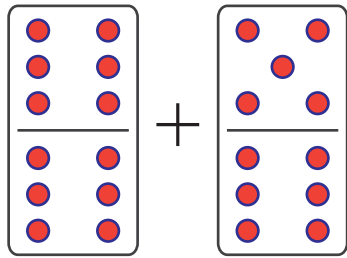
$$11 + 5 = 16$$



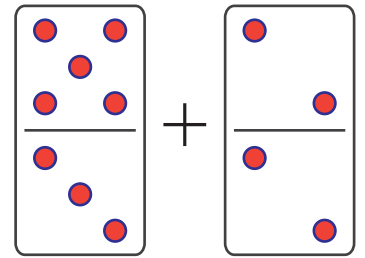
$$8 + 6 = 14$$



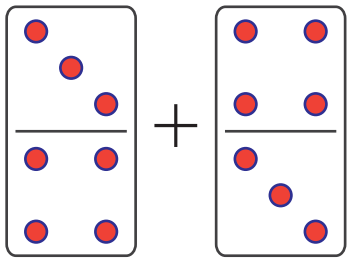
$$5 + 8 = 13$$



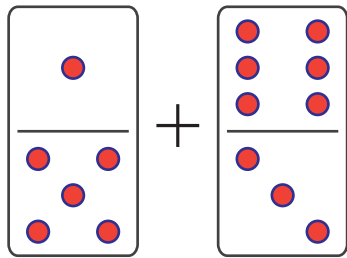
$$12 + 11 = 23$$



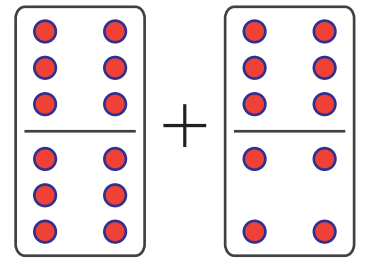
$$8 + 4 = 12$$



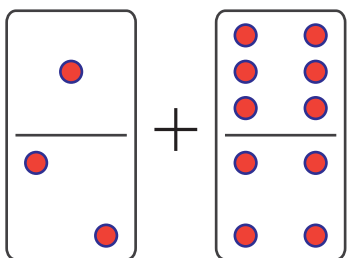
$$7 + 7 = 14$$



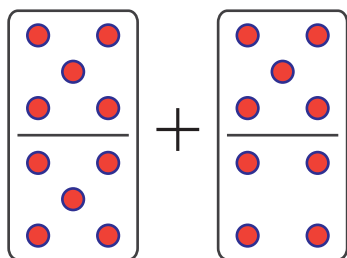
$$6 + 9 = 15$$



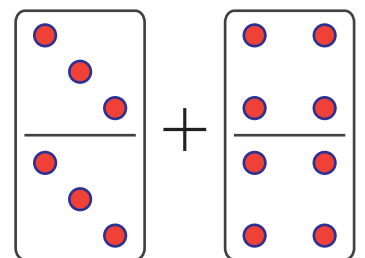
$$12 + 10 = 22$$



$$3 + 10 = 13$$



$$10 + 9 = 19$$



$$6 + 8 = 14$$