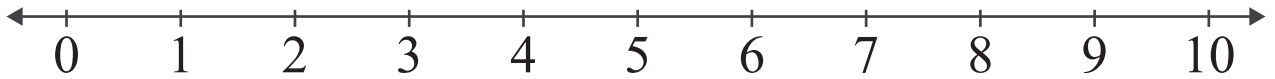


# Number Lines: Sum up to 10

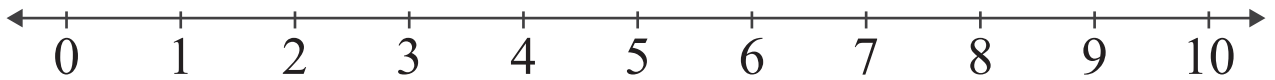
Name: \_\_\_\_\_ Score: \_\_\_\_\_

Add the numbers and use the number line to show how to find the sum.



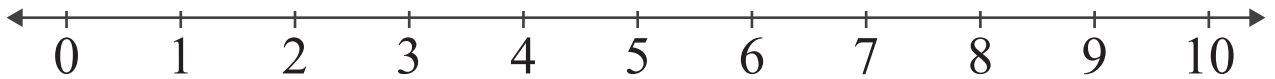
$$1 + 5 = \square$$

---



$$3 + 4 = \square$$

---



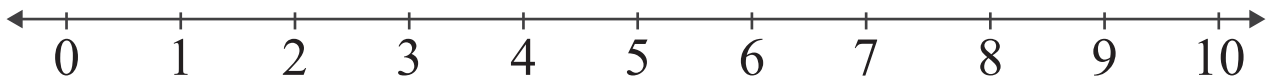
$$5 + 4 = \square$$

---



$$2 + 6 = \square$$

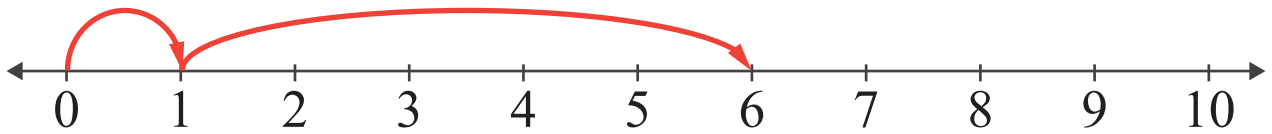
---



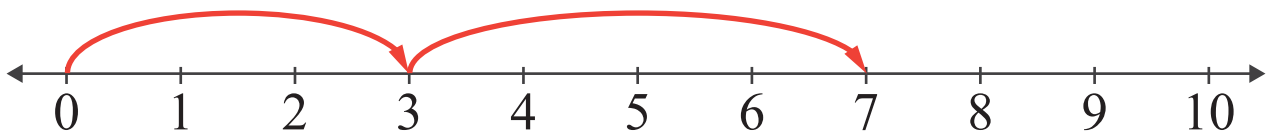
$$5 + 5 = \square$$

# Answers

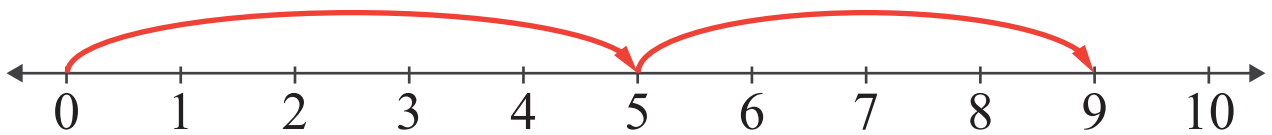
Add the numbers and use the number line to show how to find the sum.



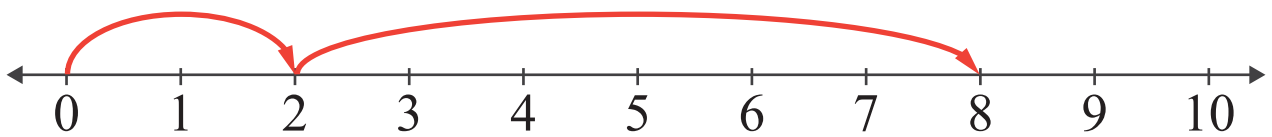
$$1 + 5 = \boxed{6}$$



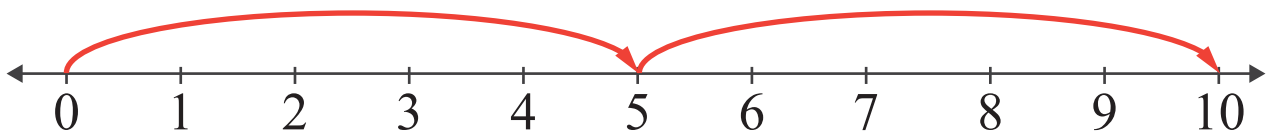
$$3 + 4 = \boxed{7}$$



$$5 + 4 = \boxed{9}$$



$$2 + 6 = \boxed{8}$$



$$5 + 5 = \boxed{10}$$