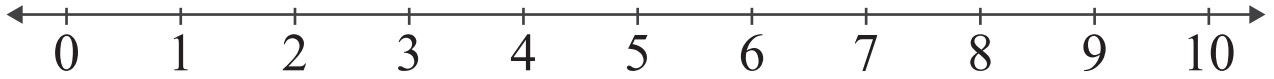


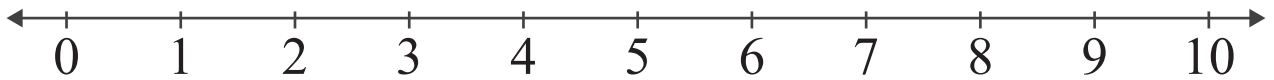
Number Lines: Sum up to 10

Name: _____ Score: _____

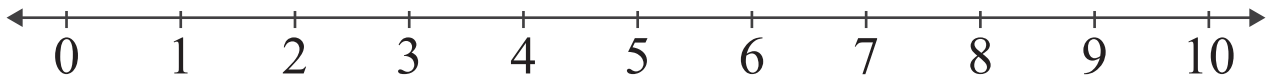
Add the numbers and use the number line to show how to find the sum.



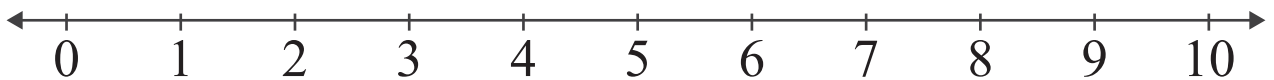
$$3 + 5 = \square$$



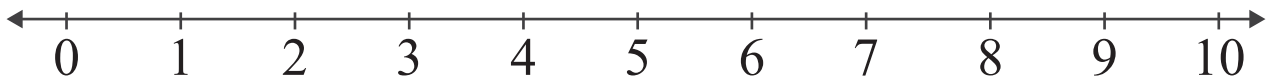
$$2 + 4 = \square$$



$$5 + 5 = \square$$



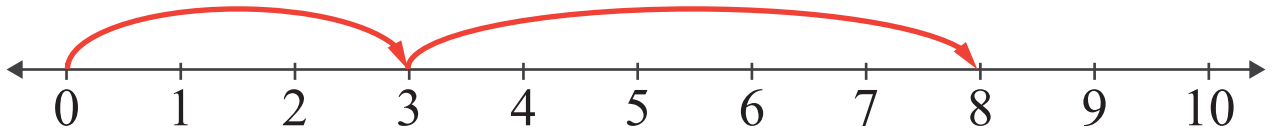
$$2 + 7 = \square$$



$$4 + 3 = \square$$

Answers

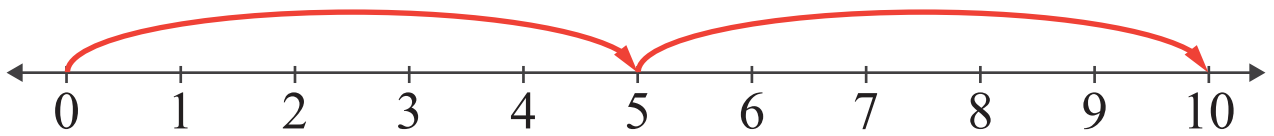
Add the numbers and use the number line to show how to find the sum.



$$3 + 5 = \boxed{8}$$



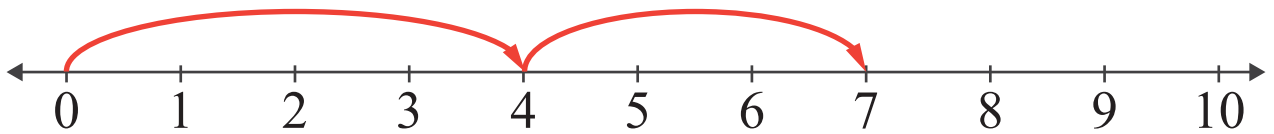
$$2 + 4 = \boxed{6}$$



$$5 + 5 = \boxed{10}$$



$$2 + 7 = \boxed{9}$$



$$4 + 3 = \boxed{7}$$