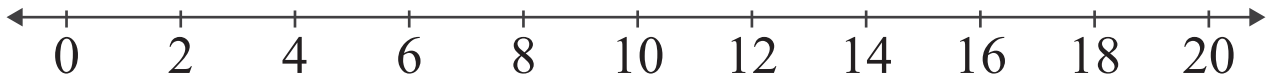


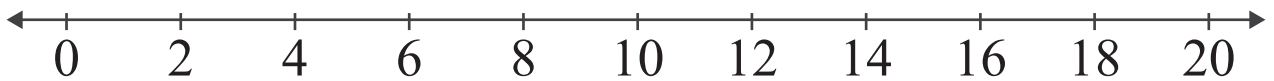
Number Lines: Sum up to 20

Name: _____ Score: _____

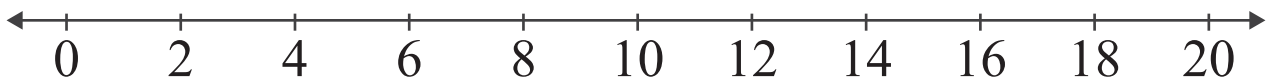
Add the numbers and use the number line to show how to find the sum.



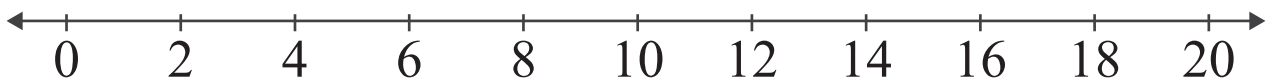
$$10 + 6 = \square$$



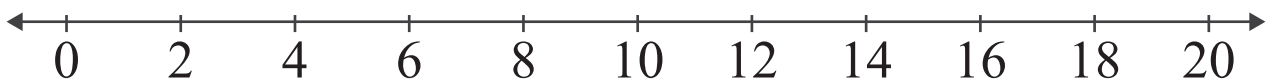
$$8 + 4 = \square$$



$$6 + 12 = \square$$



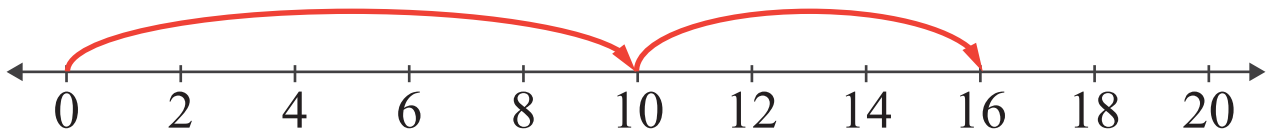
$$4 + 16 = \square$$



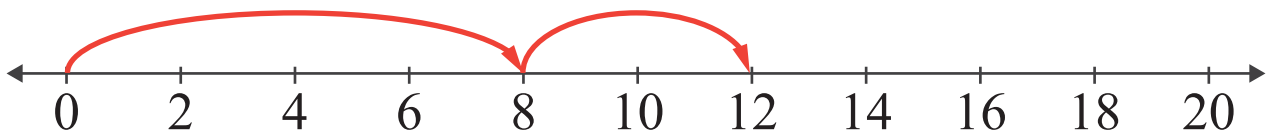
$$6 + 6 = \square$$

Answers

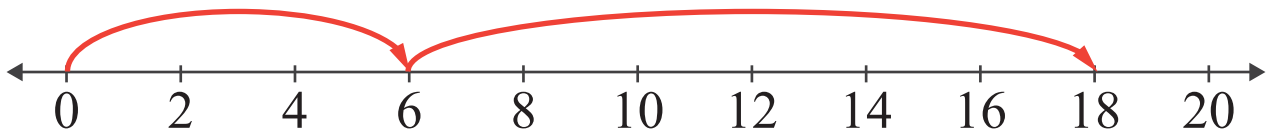
Add the numbers and use the number line to show how to find the sum.



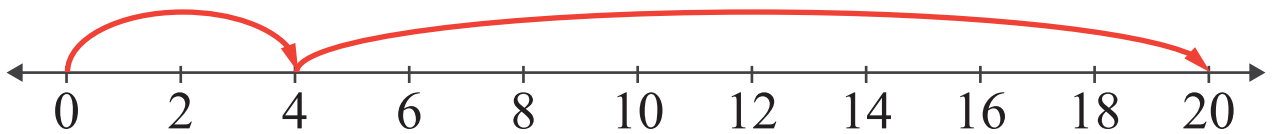
$$10 + 6 = \boxed{16}$$



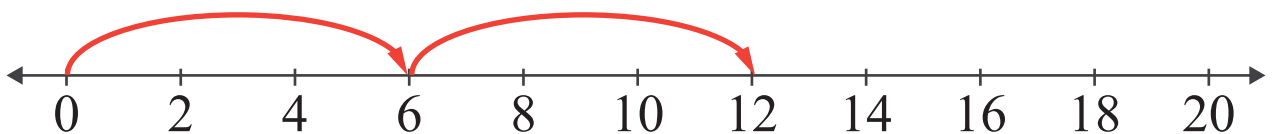
$$8 + 4 = \boxed{12}$$



$$6 + 12 = \boxed{18}$$



$$4 + 16 = \boxed{20}$$



$$6 + 6 = \boxed{12}$$