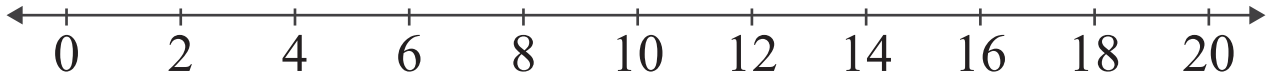


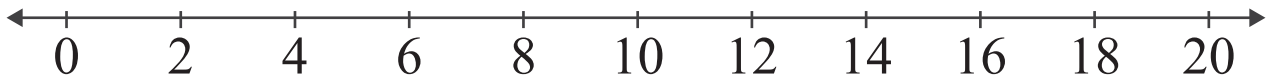
Number Lines: Sum up to 20

Name: _____ Score: _____

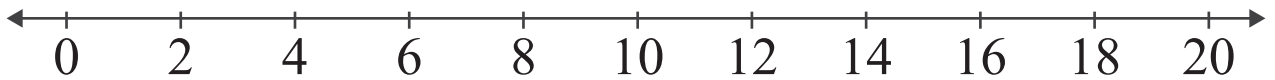
Add the numbers and use the number line to show how to find the sum.



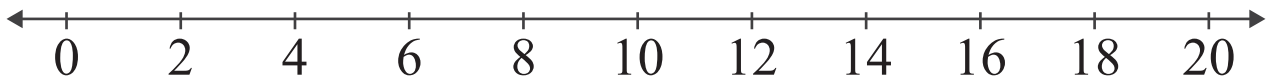
$$2 + 8 = \boxed{}$$



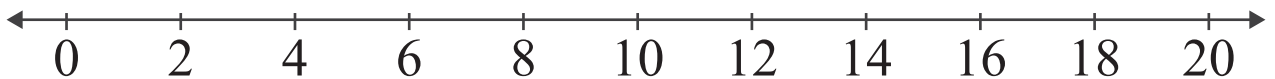
$$10 + 6 = \boxed{}$$



$$4 + 10 = \boxed{}$$



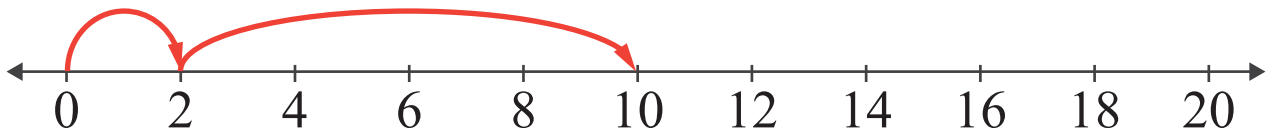
$$8 + 8 = \boxed{}$$



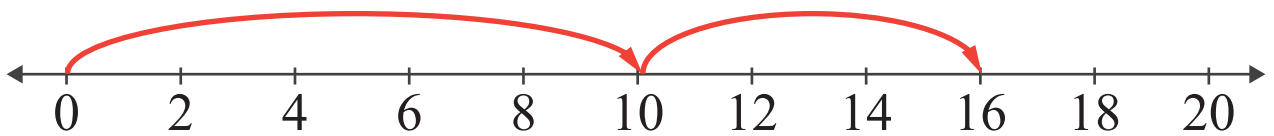
$$10 + 10 = \boxed{}$$

Answers

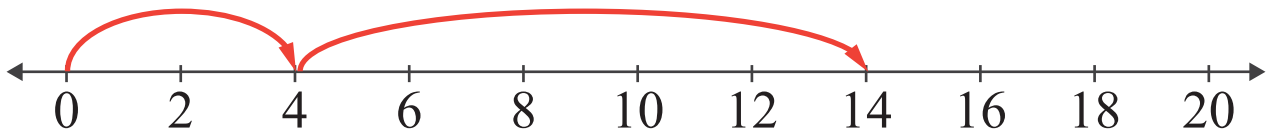
Add the numbers and use the number line to show how to find the sum.



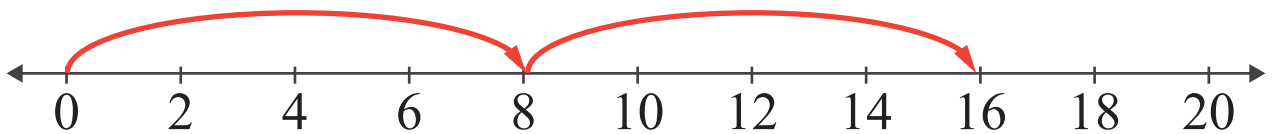
$$2 + 8 = \boxed{10}$$



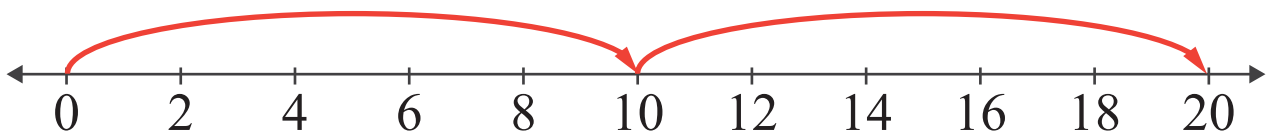
$$10 + 6 = \boxed{16}$$



$$4 + 10 = \boxed{14}$$



$$8 + 8 = \boxed{16}$$



$$10 + 10 = \boxed{20}$$