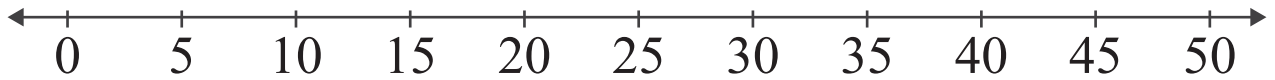


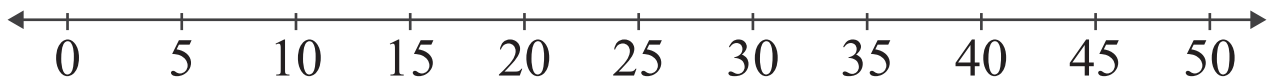
Number Lines: Sum up to 50

Name: _____ Score: _____

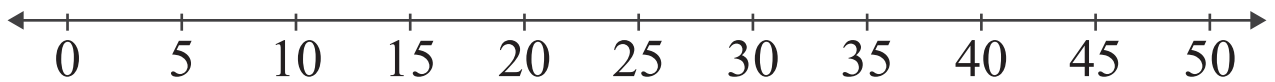
Add the numbers and use the number line to show how to find the sum.



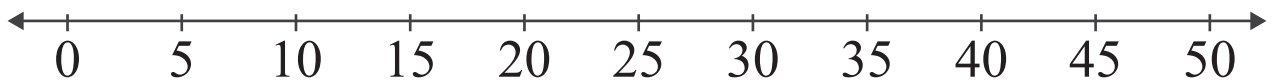
$$10 + 30 = \boxed{}$$



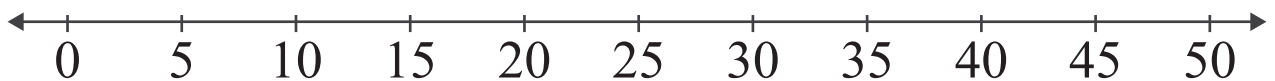
$$25 + 15 = \boxed{}$$



$$30 + 20 = \boxed{}$$



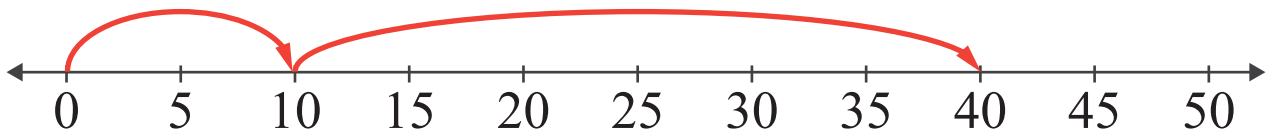
$$5 + 45 = \boxed{}$$



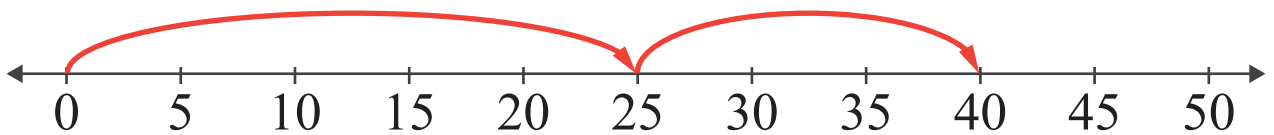
$$15 + 35 = \boxed{}$$

Answers

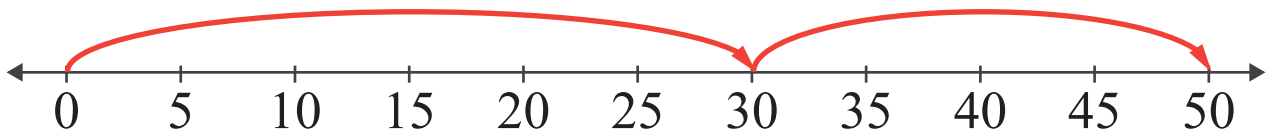
Add the numbers and use the number line to show how to find the sum.



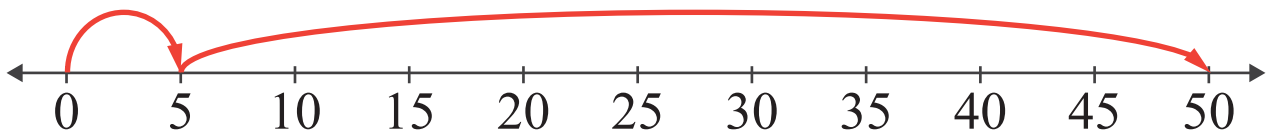
$$10 + 30 = \boxed{40}$$



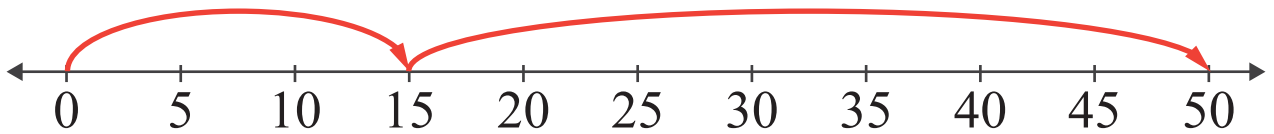
$$25 + 15 = \boxed{40}$$



$$30 + 20 = \boxed{50}$$



$$5 + 45 = \boxed{50}$$



$$15 + 35 = \boxed{50}$$