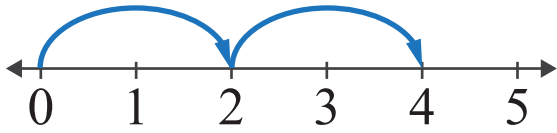


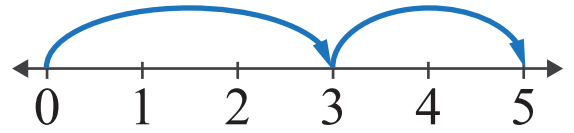
Number Lines: Sum up to 5

Name: _____ Score: _____

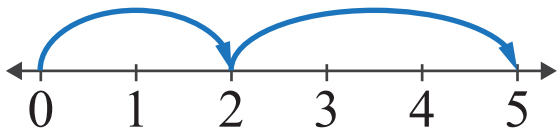
Look at the number lines and complete the addition sentences.



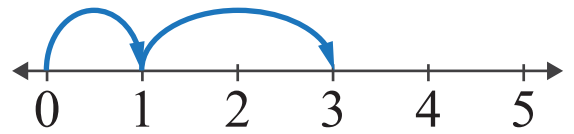
$$\square + \square = \square$$



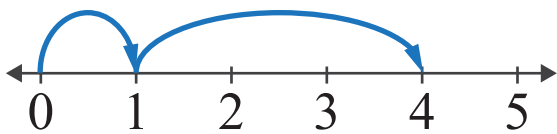
$$\square + \square = \square$$



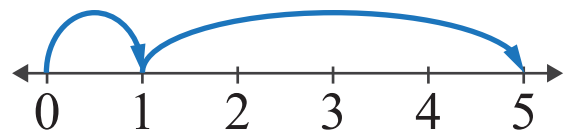
$$\square + \square = \square$$



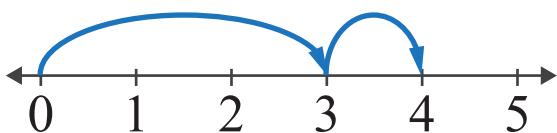
$$\square + \square = \square$$



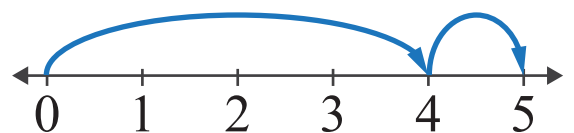
$$\square + \square = \square$$



$$\square + \square = \square$$



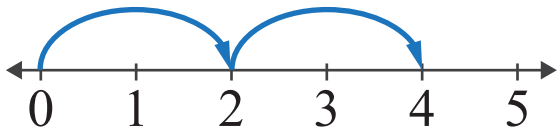
$$\square + \square = \square$$



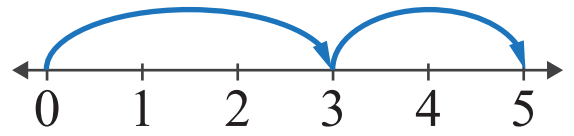
$$\square + \square = \square$$

Answers

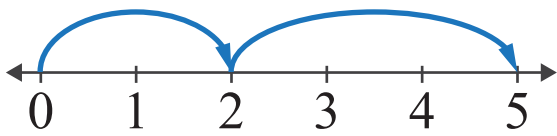
Look at the number lines and complete the addition sentences.



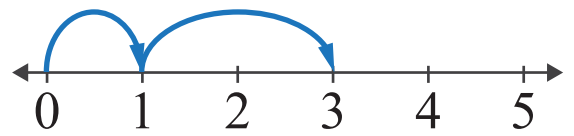
$$\boxed{2} + \boxed{2} = \boxed{4}$$



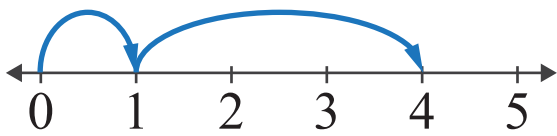
$$\boxed{3} + \boxed{2} = \boxed{5}$$



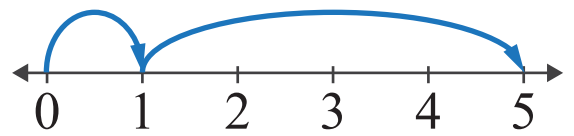
$$\boxed{2} + \boxed{3} = \boxed{5}$$



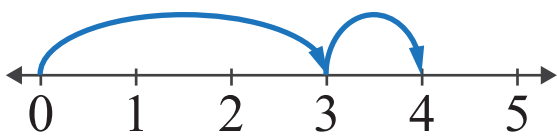
$$\boxed{1} + \boxed{2} = \boxed{3}$$



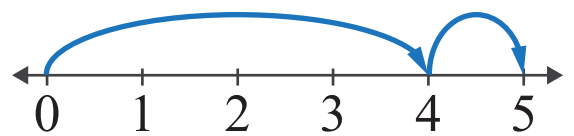
$$\boxed{1} + \boxed{3} = \boxed{4}$$



$$\boxed{1} + \boxed{4} = \boxed{5}$$



$$\boxed{3} + \boxed{1} = \boxed{4}$$



$$\boxed{4} + \boxed{1} = \boxed{5}$$