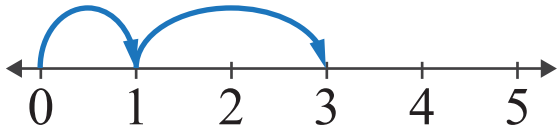


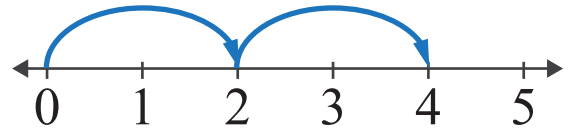
Number Lines: Sum up to 5

Name: _____ Score: _____

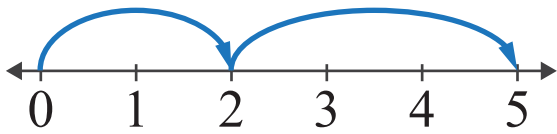
Look at the number lines and complete the addition sentences.



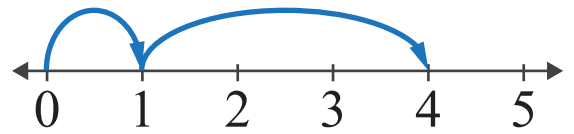
$$\square + \square = \square$$



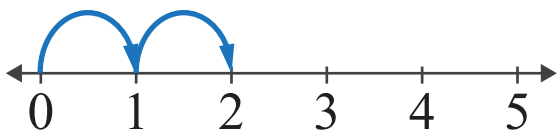
$$\square + \square = \square$$



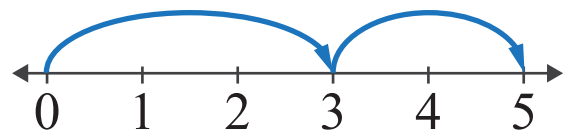
$$\square + \square = \square$$



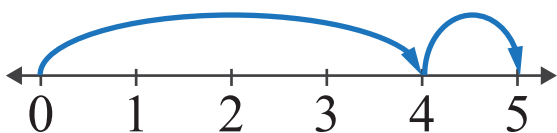
$$\square + \square = \square$$



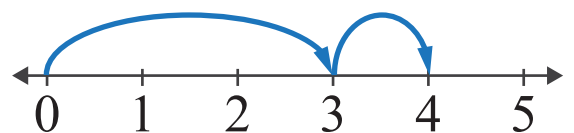
$$\square + \square = \square$$



$$\square + \square = \square$$



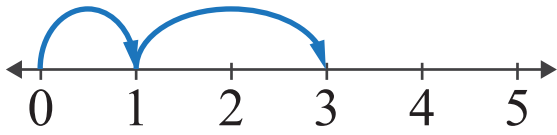
$$\square + \square = \square$$



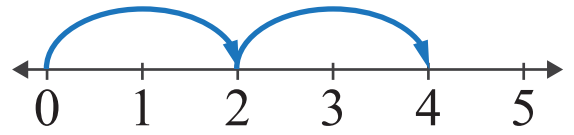
$$\square + \square = \square$$

Answers

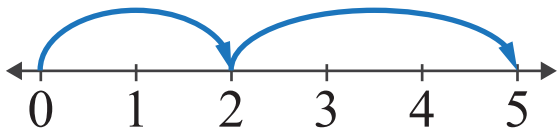
Look at the number lines and complete the addition sentences.



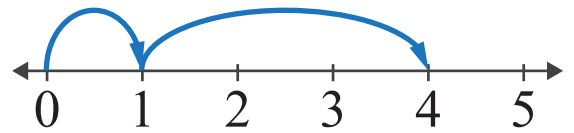
$$1 + 2 = 3$$



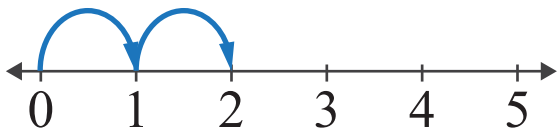
$$2 + 2 = 4$$



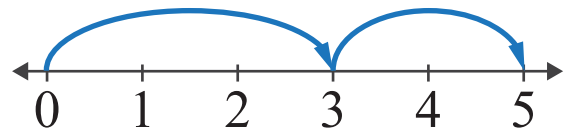
$$2 + 3 = 5$$



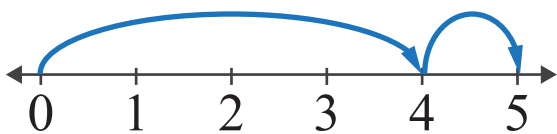
$$1 + 3 = 4$$



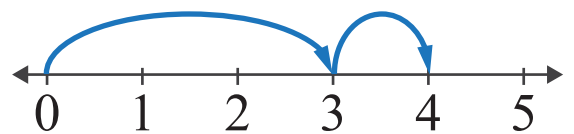
$$1 + 1 = 2$$



$$3 + 2 = 5$$



$$4 + 1 = 5$$



$$3 + 1 = 4$$