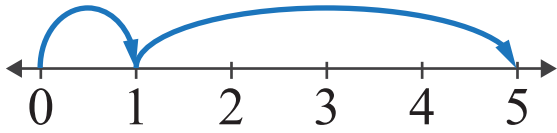


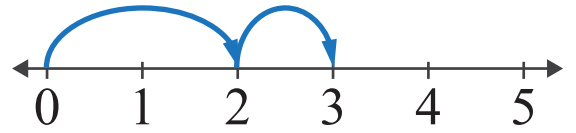
# Number Lines: Sum up to 5

Name: \_\_\_\_\_ Score: \_\_\_\_\_

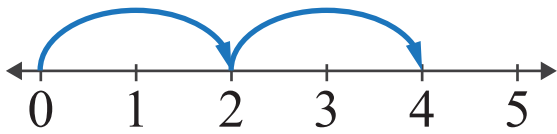
Look at the number lines and complete the addition sentences.



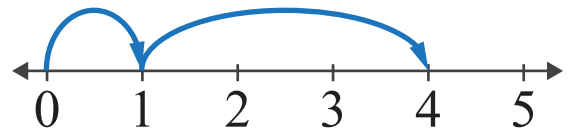
$$\square + \square = \square$$



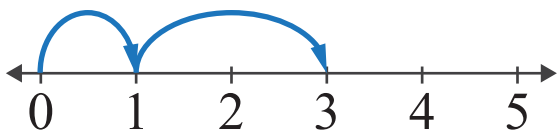
$$\square + \square = \square$$



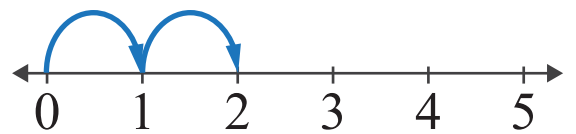
$$\square + \square = \square$$



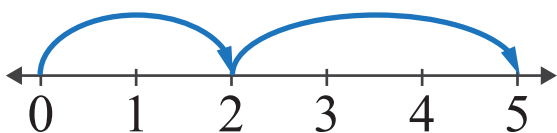
$$\square + \square = \square$$



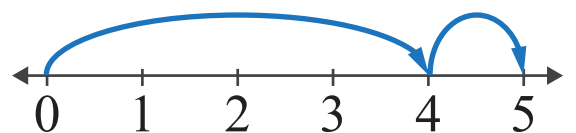
$$\square + \square = \square$$



$$\square + \square = \square$$



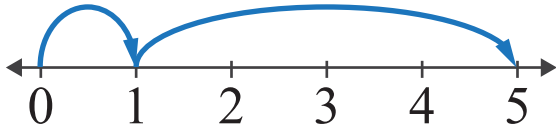
$$\square + \square = \square$$



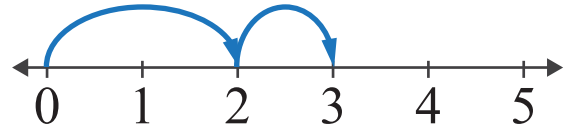
$$\square + \square = \square$$

# Answers

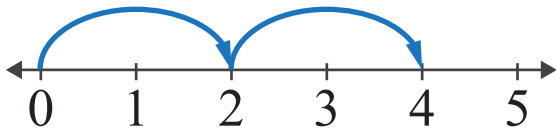
Look at the number lines and complete the addition sentences.



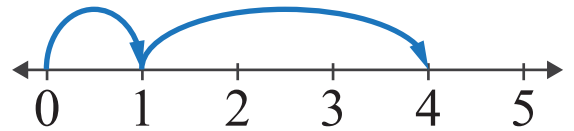
$$1 + 4 = 5$$



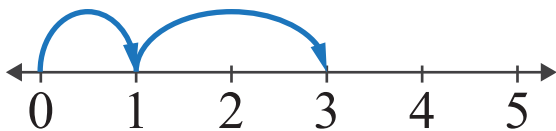
$$2 + 1 = 3$$



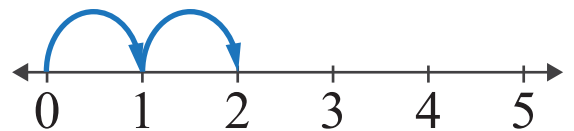
$$2 + 2 = 4$$



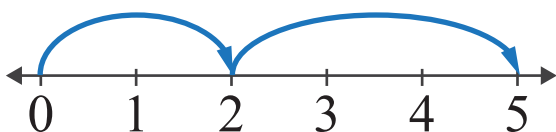
$$1 + 3 = 4$$



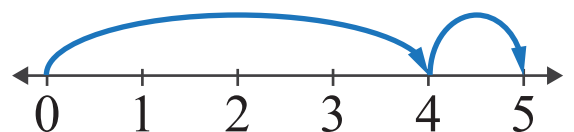
$$1 + 2 = 3$$



$$1 + 1 = 2$$



$$2 + 3 = 5$$



$$4 + 1 = 5$$