


# Comparing Numbers up to 20

Name: \_\_\_\_\_ Score: \_\_\_\_\_

Circle the bigger numbers





- a)  18      b) 14 17      c) 19 0  
d) 7 11      e) 11 19      f) 12 10  
g) 13 12      h) 3 1      i) 19 20




Circle the smaller numbers

- j) 19 11      k) 12 16      l) 14 13  
m) 17 18      n) 10 9      r) 15 10  
o) 3 8      p) 19 20      q) 5 15

Write the following numbers in the circles, from the greatest to the smallest.

Greatest 12 5 18 20 Smallest

  17 11 16  

# Answers

Circle the bigger numbers

- a) 19 18      b) 14 17      c) 19 0  
d) 7 11      e) 11 19      f) 12 10  
g) 13 12      h) 3 1      i) 19 20

Circle the smaller numbers

- j) 19 11      k) 12 16      l) 14 13  
m) 17 18      n) 10 9      r) 15 10  
o) 3 8      p) 19 20      q) 5 15

Write the following numbers in the circles, from the greatest to the smallest.

Greatest      12      5      18      20      Smallest

20

18      17      11      16      5

18      17      16      12      11