


# Comparing Height

Name: \_\_\_\_\_ Class: \_\_\_\_\_

Compare the following animals in terms of height and answer the questions!




Hippo



Giraffe



Tiger




Mouse

1. Who is the shortest? \_\_\_\_\_
2. Who is the tallest? \_\_\_\_\_
3. Tiger is \_\_\_\_\_ than Mouse.
4. Giraffe is \_\_\_\_\_ than Hippo.
5. Tiger is \_\_\_\_\_ than Giraffe.
6. Hippo is \_\_\_\_\_ than Giraffe.
7. Giraffe is \_\_\_\_\_ than Mouse.
8. Mouse is \_\_\_\_\_ than Tiger.
9. Who is taller than Mouse but shorter than Hippo?  
\_\_\_\_\_
10. Who is shorter than Giraffe and shorter than Tiger?  
\_\_\_\_\_

# Answers

Compare the following animals in terms of height and answer the questions!




Hippo



Giraffe



Tiger



Mouse

1. Who is the shortest? Mousse
2. Who is the tallest? Giraffe
3. Tiger is taller than Mouse.
4. Giraffe is taller than Hippo.
5. Tiger is shorter than Giraffe.
6. Hippo is shorter than Giraffe.
7. Giraffe is taller than Mouse.
8. Mouse is shorter than Tiger.
9. Who is taller than Mouse but shorter than Hippo?  
Tiger
10. Who is shorter than Giraffe and shorter than Tiger?  
Mousse