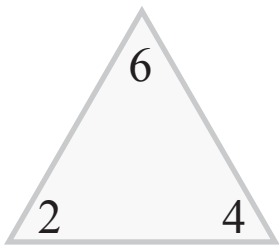


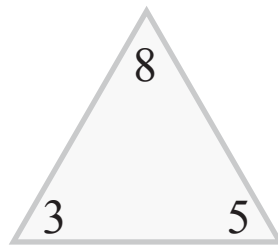
Addition and Subtraction Fact Families

Name: _____ Score: _____

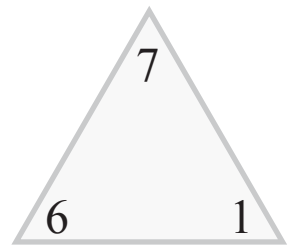
For each triangle, write each possible addition and subtraction sentence.



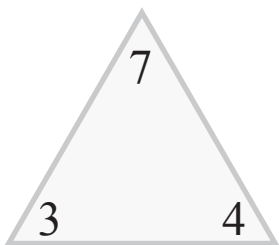
$$\begin{array}{r} _ + _ = _ \\ _ + _ = _ \\ _ - _ = _ \\ _ - _ = _ \end{array}$$



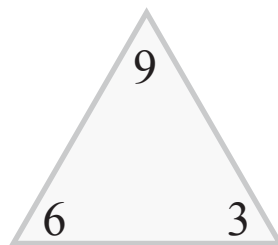
$$\begin{array}{r} _ + _ = _ \\ _ + _ = _ \\ _ - _ = _ \\ _ - _ = _ \end{array}$$



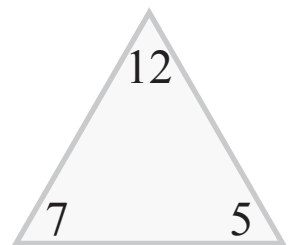
$$\begin{array}{r} _ + _ = _ \\ _ + _ = _ \\ _ - _ = _ \\ _ - _ = _ \end{array}$$



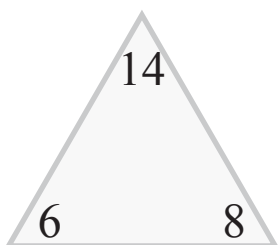
$$\begin{array}{r} _ + _ = _ \\ _ + _ = _ \\ _ - _ = _ \\ _ - _ = _ \end{array}$$



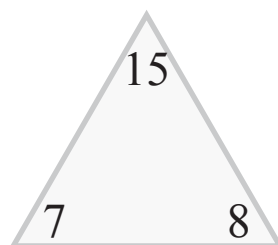
$$\begin{array}{r} _ + _ = _ \\ _ + _ = _ \\ _ - _ = _ \\ _ - _ = _ \end{array}$$



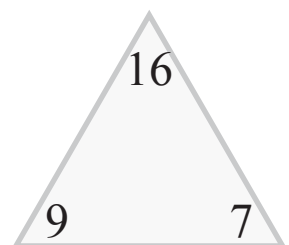
$$\begin{array}{r} _ + _ = _ \\ _ + _ = _ \\ _ - _ = _ \\ _ - _ = _ \end{array}$$



$$\begin{array}{r} _ + _ = _ \\ _ + _ = _ \\ _ - _ = _ \\ _ - _ = _ \end{array}$$



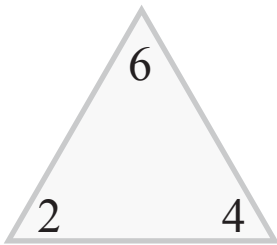
$$\begin{array}{r} _ + _ = _ \\ _ + _ = _ \\ _ - _ = _ \\ _ - _ = _ \end{array}$$



$$\begin{array}{r} _ + _ = _ \\ _ + _ = _ \\ _ - _ = _ \\ _ - _ = _ \end{array}$$

Answers

For each triangle, write each possible addition and subtraction sentence.

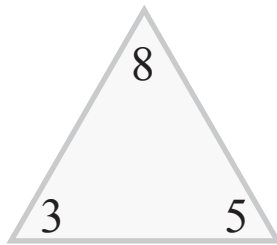


$$\underline{2} + \underline{4} = \underline{6}$$

$$\underline{4} + \underline{2} = \underline{6}$$

$$\underline{6} - \underline{2} = \underline{4}$$

$$\underline{6} - \underline{4} = \underline{2}$$

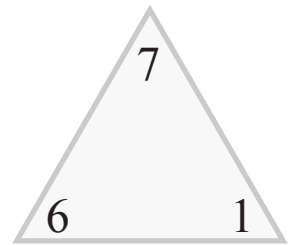


$$\underline{3} + \underline{5} = \underline{8}$$

$$\underline{5} + \underline{3} = \underline{8}$$

$$\underline{8} - \underline{3} = \underline{5}$$

$$\underline{8} - \underline{5} = \underline{3}$$

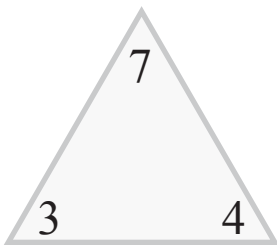


$$\underline{6} + \underline{1} = \underline{7}$$

$$\underline{1} + \underline{6} = \underline{7}$$

$$\underline{7} - \underline{6} = \underline{1}$$

$$\underline{7} - \underline{1} = \underline{6}$$

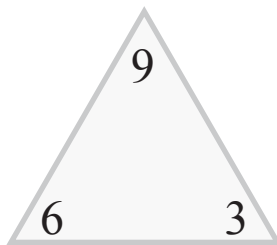


$$\underline{3} + \underline{4} = \underline{7}$$

$$\underline{4} + \underline{3} = \underline{7}$$

$$\underline{7} - \underline{3} = \underline{4}$$

$$\underline{7} - \underline{4} = \underline{3}$$

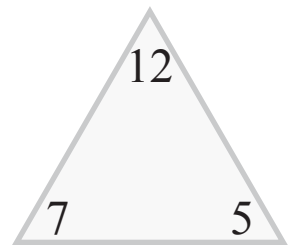


$$\underline{6} + \underline{3} = \underline{9}$$

$$\underline{3} + \underline{6} = \underline{9}$$

$$\underline{9} - \underline{6} = \underline{3}$$

$$\underline{9} - \underline{3} = \underline{6}$$

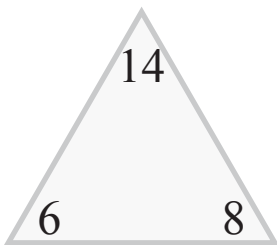


$$\underline{7} + \underline{5} = \underline{12}$$

$$\underline{5} + \underline{7} = \underline{12}$$

$$\underline{12} - \underline{7} = \underline{5}$$

$$\underline{12} - \underline{5} = \underline{7}$$

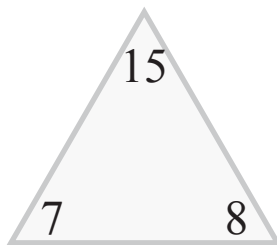


$$\underline{6} + \underline{8} = \underline{14}$$

$$\underline{8} + \underline{6} = \underline{14}$$

$$\underline{14} - \underline{6} = \underline{8}$$

$$\underline{14} - \underline{8} = \underline{6}$$

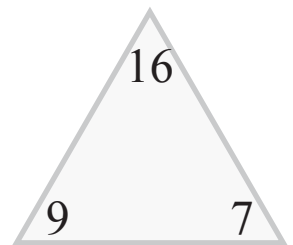


$$\underline{7} + \underline{8} = \underline{15}$$

$$\underline{8} + \underline{7} = \underline{15}$$

$$\underline{15} - \underline{7} = \underline{8}$$

$$\underline{15} - \underline{8} = \underline{7}$$



$$\underline{9} + \underline{7} = \underline{16}$$

$$\underline{7} + \underline{9} = \underline{16}$$

$$\underline{16} - \underline{9} = \underline{7}$$

$$\underline{16} - \underline{7} = \underline{9}$$