

# Odd and Even Numbers

Name: \_\_\_\_\_ Score: \_\_\_\_\_




Count the objects and tell whether there is an odd or even number of objects



How many papers? 10

Odd or even? Even




How many apples? \_\_\_\_\_

Odd or even? \_\_\_\_\_



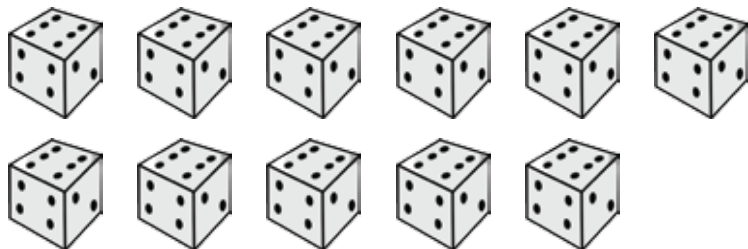
How many balls? \_\_\_\_\_

Odd or even? \_\_\_\_\_



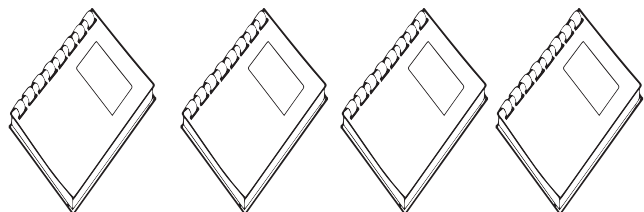
How many pigs? \_\_\_\_\_

Odd or even? \_\_\_\_\_



How many dice? \_\_\_\_\_

Odd or even? \_\_\_\_\_



How many books? \_\_\_\_\_

Odd or even? \_\_\_\_\_

# Answers




Count the objects and tell whether there is an odd or even number of objects



How many papers? 10

Odd or even? Even




How many apples? 9

Odd or even? Odd



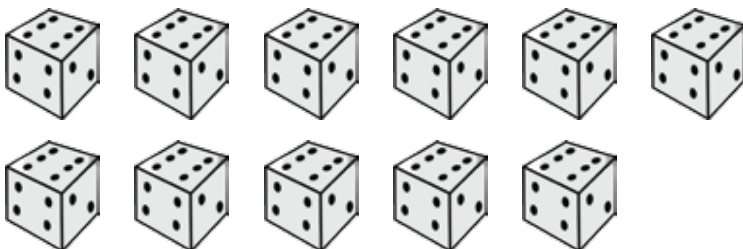
How many balls? 8

Odd or even? Even



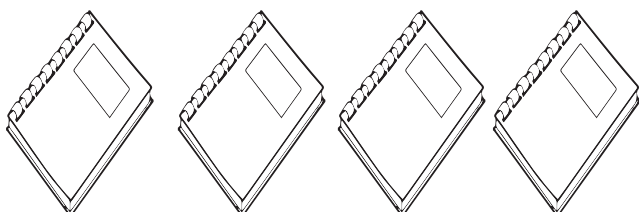
How many pigs? 3

Odd or even? Odd



How many dice? 11

Odd or even? Odd



How many books? 4

Odd or even? Even