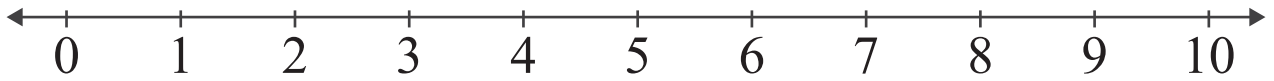


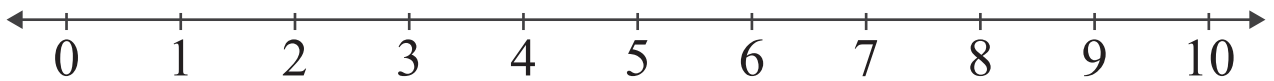
Subtraction by Number Lines

Name: _____ Score: _____

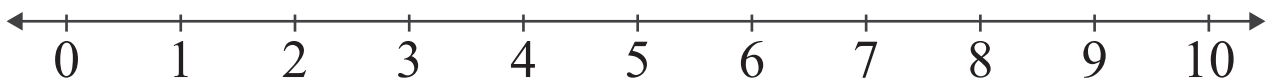
Subtract and use the number line to show how to find the difference.



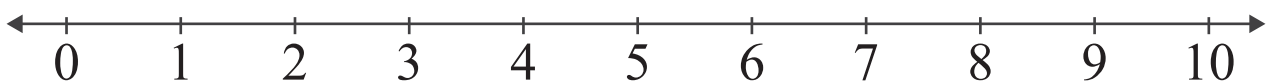
$$7 - 2 = \boxed{}$$



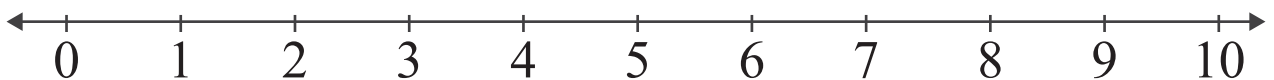
$$8 - 5 = \boxed{}$$



$$9 - 4 = \boxed{}$$



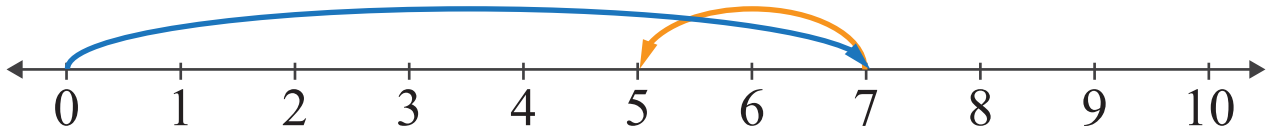
$$7 - 1 = \boxed{}$$



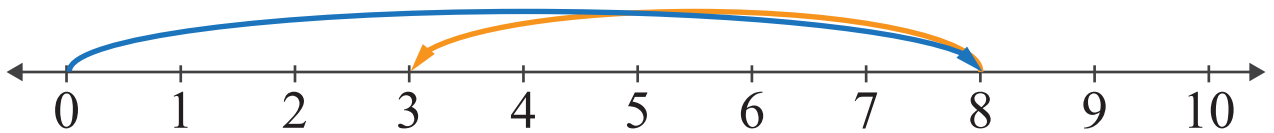
$$10 - 3 = \boxed{}$$

Answers

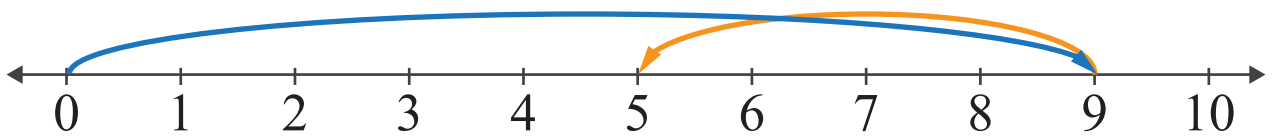
Subtract and use the number line to show how to find the difference.



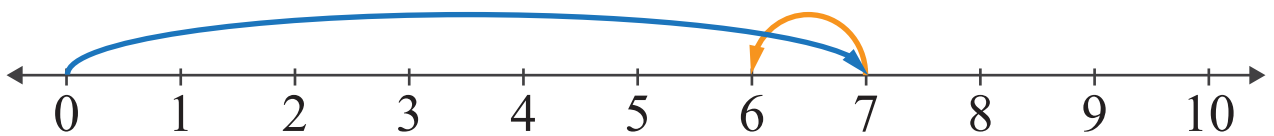
$$7 - 2 = \boxed{5}$$



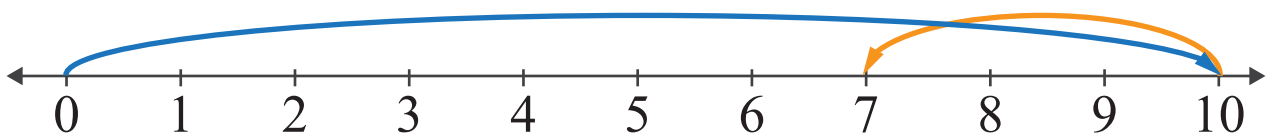
$$8 - 5 = \boxed{3}$$



$$9 - 4 = \boxed{5}$$



$$7 - 1 = \boxed{6}$$



$$10 - 3 = \boxed{7}$$