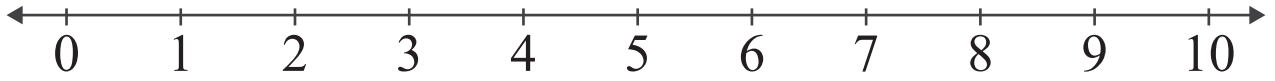


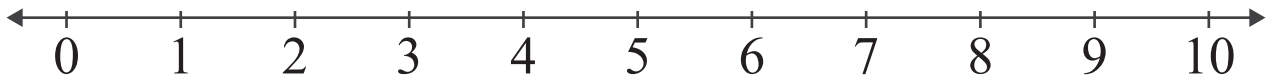
Subtraction by Number Lines

Name: _____ Score: _____

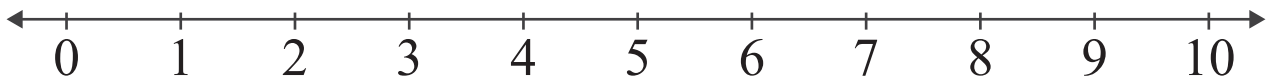
Subtract and use the number line to show how to find the difference.



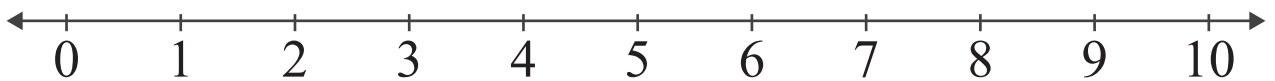
$$9 - 2 = \square$$



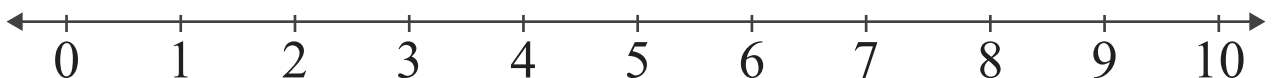
$$7 - 5 = \square$$



$$8 - 4 = \square$$



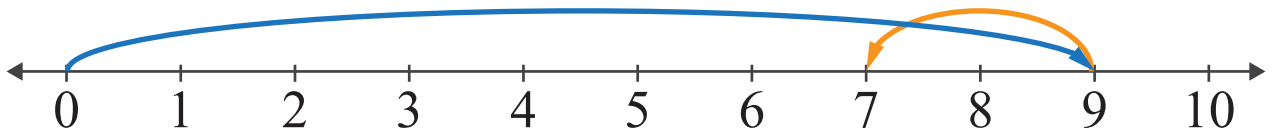
$$9 - 5 = \square$$



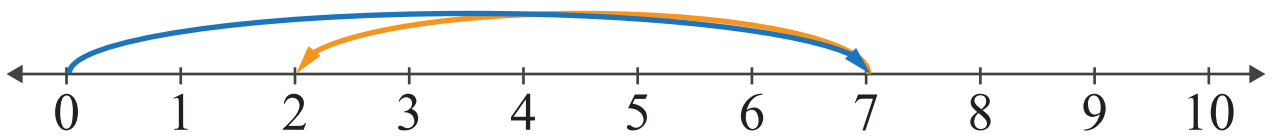
$$10 - 6 = \square$$

Answers

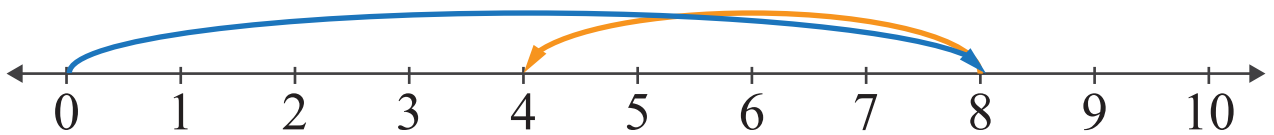
Subtract and use the number line to show how to find the difference.



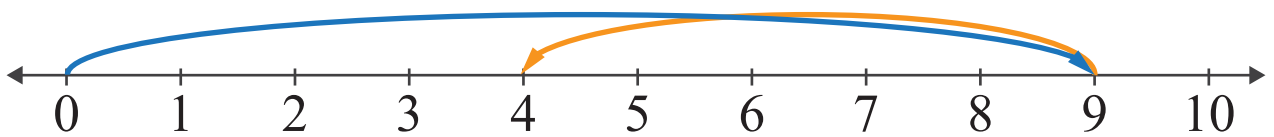
$$9 - 2 = \boxed{7}$$



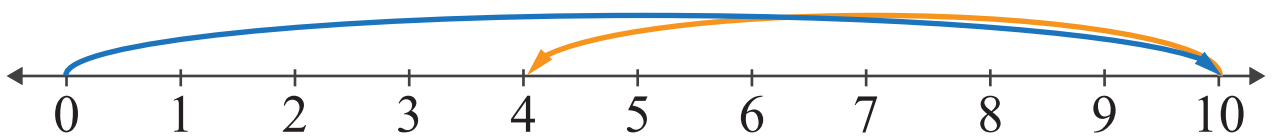
$$7 - 5 = \boxed{2}$$



$$8 - 4 = \boxed{4}$$



$$9 - 5 = \boxed{4}$$



$$10 - 6 = \boxed{4}$$