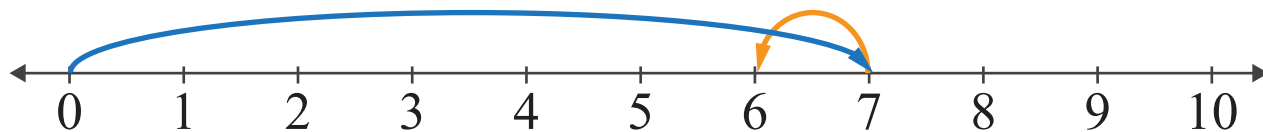


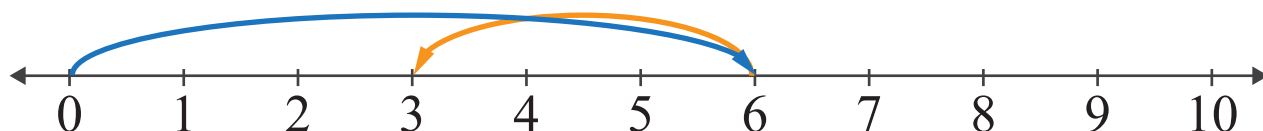
Subtraction by Number Lines

Name: _____ Score: _____

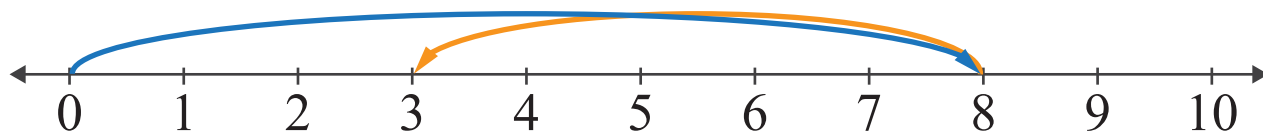
Look at the number lines and complete the subtraction sentences.



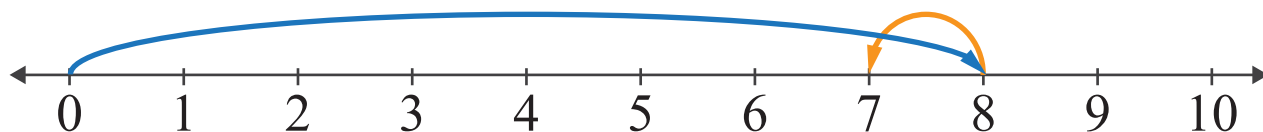
$$\square - \square = \square$$



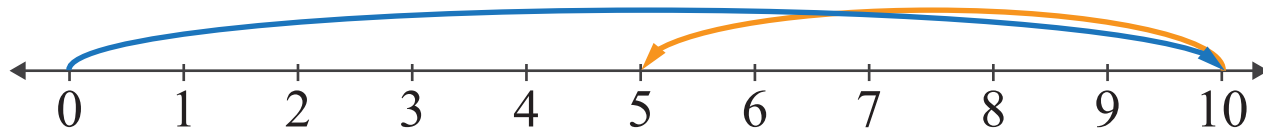
$$\square - \square = \square$$



$$\square - \square = \square$$



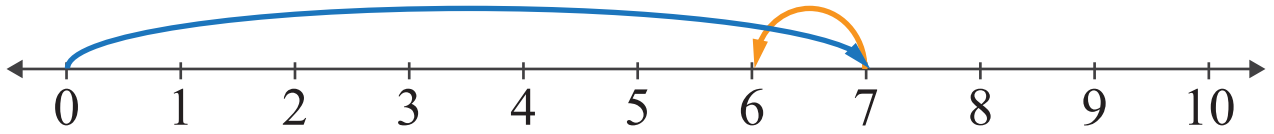
$$\square - \square = \square$$



$$\square - \square = \square$$

Answers

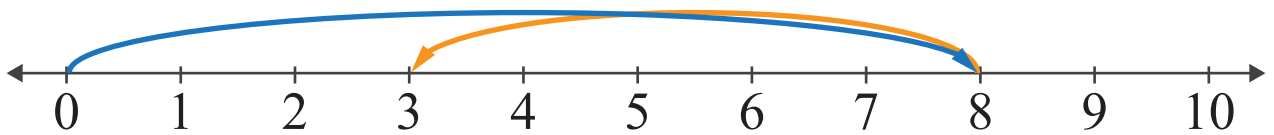
Look at the number lines and complete the subtraction sentences.



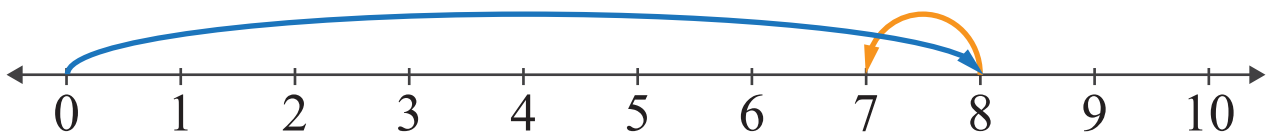
$$\boxed{7} - \boxed{1} = \boxed{6}$$



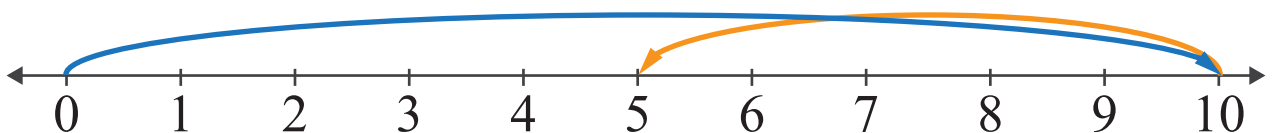
$$\boxed{6} - \boxed{3} = \boxed{3}$$



$$\boxed{8} - \boxed{5} = \boxed{3}$$



$$\boxed{8} - \boxed{1} = \boxed{7}$$



$$\boxed{10} - \boxed{5} = \boxed{5}$$