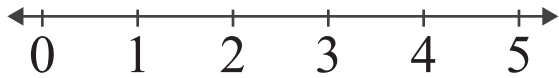


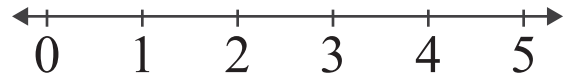
Subtraction by Number Lines

Name: _____ Score: _____

Subtract and use the number line to show how to find the difference.



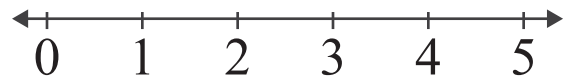
$$3 - 2 = \boxed{1}$$



$$5 - 2 = \boxed{}$$



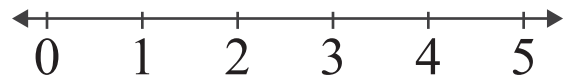
$$2 - 1 = \boxed{}$$



$$4 - 3 = \boxed{}$$



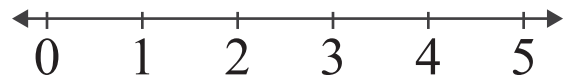
$$5 - 1 = \boxed{}$$



$$4 - 1 = \boxed{}$$



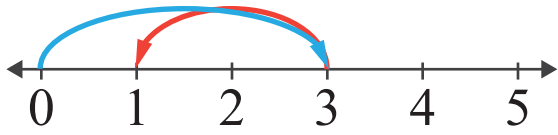
$$5 - 3 = \boxed{}$$



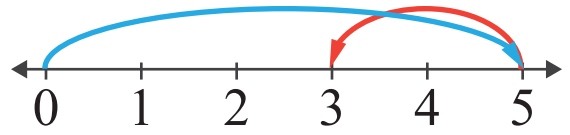
$$4 - 2 = \boxed{}$$

Answers

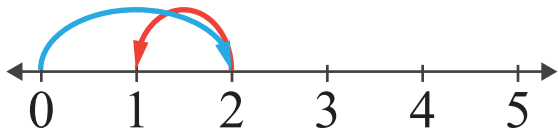
Subtract and use the number line to show how to find the difference.



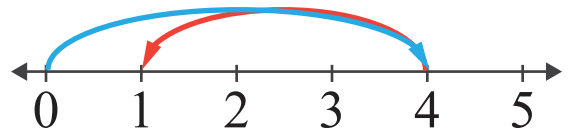
$$3 - 2 = \boxed{1}$$



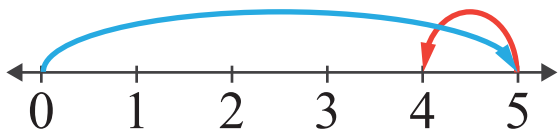
$$5 - 2 = \boxed{3}$$



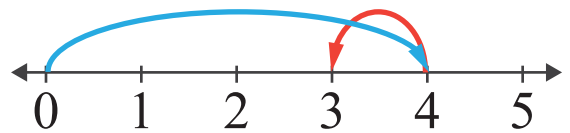
$$2 - 1 = \boxed{1}$$



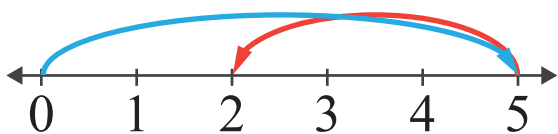
$$4 - 3 = \boxed{1}$$



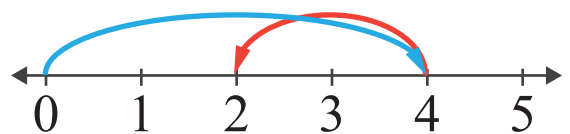
$$5 - 1 = \boxed{4}$$



$$4 - 1 = \boxed{3}$$



$$5 - 3 = \boxed{2}$$



$$4 - 2 = \boxed{2}$$