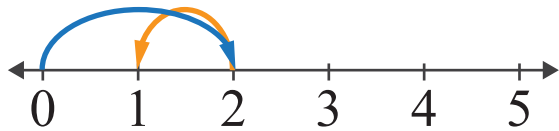


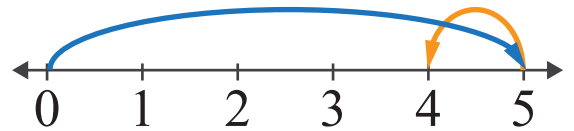
Subtraction by Number Lines

Name: _____ Score: _____

Look at the number lines and complete the subtraction sentences.



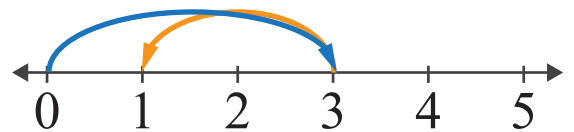
$$\square - \square = \square$$



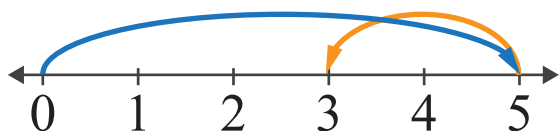
$$\square - \square = \square$$



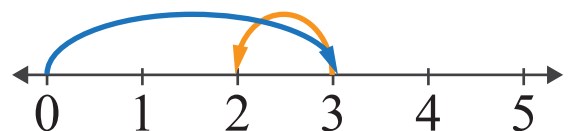
$$\square - \square = \square$$



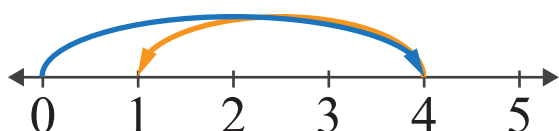
$$\square - \square = \square$$



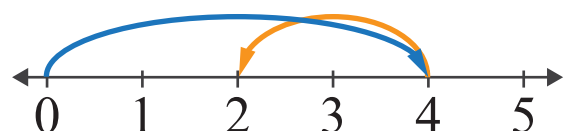
$$\square - \square = \square$$



$$\square - \square = \square$$



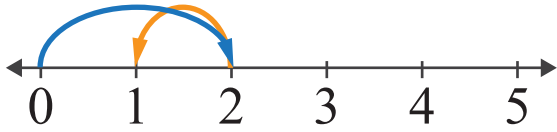
$$\square - \square = \square$$



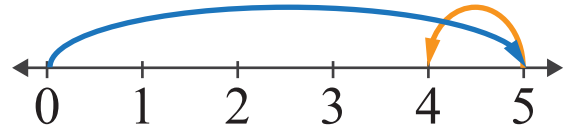
$$\square - \square = \square$$

Answers

Look at the number lines and complete the subtraction sentences.



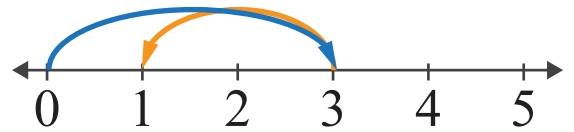
$$2 - 1 = 1$$



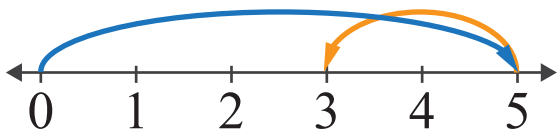
$$5 - 1 = 4$$



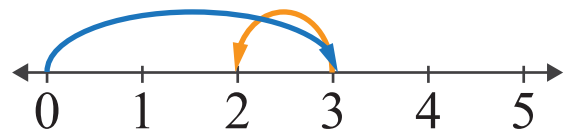
$$5 - 4 = 1$$



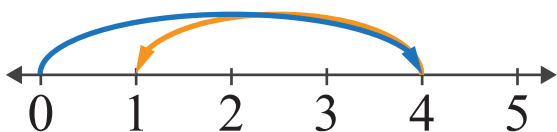
$$3 - 2 = 1$$



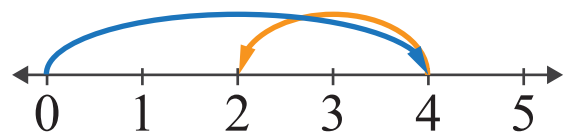
$$5 - 2 = 3$$



$$3 - 1 = 2$$



$$4 - 3 = 1$$



$$4 - 2 = 2$$