


Adding Time

Name: _____ Class: _____

Read the clocks and answer the questions




What time is it on the clock?

What time will it be in 1 hour?

What time will it be in 2 hours?

What time will it be in 7 hours?




What time is it on the clock?

What time will it be in 1 hour?

What time will it be in 2 hours?

What time will it be in 5 hours?




What time is it on the clock?

What time will it be in 1 hour?

What time will it be in 30 minutes?

What time will it be in 2 hours?



What time is it on the clock?


What time will it be in 2 hours?

What time will it be in 30 minutes?

What time will it be in 6 hours?

Answers

Read the clocks and answer the questions



What time is it on the clock?

9 o'clock

What time will it be in 1 hour?


10 o'clock

What time will it be in 2 hours?

11 o'clock

What time will it be in 7 hours?

4 o'clock



What time is it on the clock?

11 o'clock

What time will it be in 1 hour?


12 o'clock

What time will it be in 2 hours?

1 o'clock

What time will it be in 5 hours?

4 o'clock



What time is it on the clock?

9:30

What time will it be in 1 hour?


10:30

What time will it be in 30 minutes?

10 o'clock

What time will it be in 2 hours?

11:30



What time is it on the clock?

4:30

What time will it be in 2 hours?

6:30

What time will it be in 30 minutes?

5 o'clock

What time will it be in 6 hours?

10:30