




Multiplication Cards

Name: _____ Class: _____

Look at the pictures and complete the multiplication sentences

1)






There are _____ playing cards.

There are _____ points on each card.

There are _____ points altogether.

2)



There are _____ playing cards.

There are _____ points on each card.

There are _____ points altogether.

3)



There are _____ playing cards.



There are _____ points on each card.

There are _____ points altogether.

Answers

Look at the pictures and complete the multiplication sentences

1)






There are 4 playing cards.

There are 5 points on each card.

There are 20 points altogether.

2)



There are 3 playing cards.

There are 6 points on each card.

There are 18 points altogether.

3)



There are 5 playing cards.

There are 4 points on each card.

There are 20 points altogether.