

Multiplication Dice

Name: _____ Class: _____

Count the pips on the dice and fill in the blanks



There are _____ dice.

There are _____ pips on each die.

There are _____ pips altogether.

Multiplication sentence: _____



There are _____ dice.

There are _____ pips on each die.

There are _____ pips altogether.

Multiplication sentence: _____




There are _____ dice.

There are _____ pips on each die.

There are _____ pips altogether.

Multiplication sentence: _____



There are _____ dice.

There are _____ pips on each die.


There are _____ pips altogether.

Multiplication sentence: _____

Answers

Count the pips on the dice and fill in the blanks

1)




There are 6 dice.

There are 2 pips on each dice.

There are 12 pips altogether.

Multiplication sentence: $6 \times 2 = 12$

2)




There are 4 dice.

There are 4 pips on each dice.

There are 16 pips altogether.

Multiplication sentence: $4 \times 4 = 16$

3)



There are 4 dice.

There are 2 pips on each dice.

There are 8 pips altogether.

Multiplication sentence: $4 \times 2 = 8$

4)



There are 6 dice.

There are 3 pips on each dice.

There are 18 pips altogether.

Multiplication sentence: $6 \times 3 = 18$