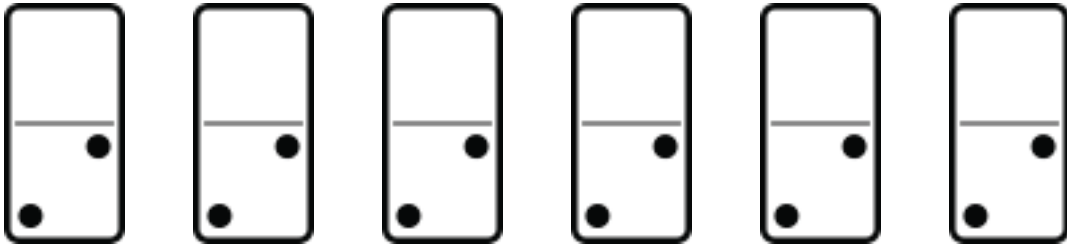


# Domino Stones

Name: \_\_\_\_\_ Class: \_\_\_\_\_

Look at the pictures and complete the multiplication sentences

1)




There are \_\_\_\_\_ domino stones

There are \_\_\_\_\_ points on each stone.

There are \_\_\_\_\_ points altogether.

2)

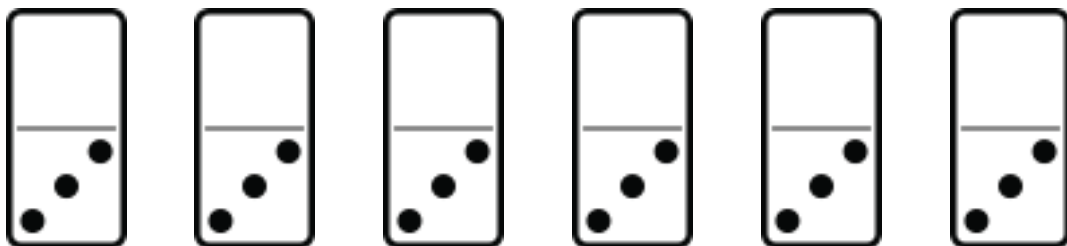


There are \_\_\_\_\_ domino stones

There are \_\_\_\_\_ points on each stone.

There are \_\_\_\_\_ points altogether.

3)



There are \_\_\_\_\_ domino stones

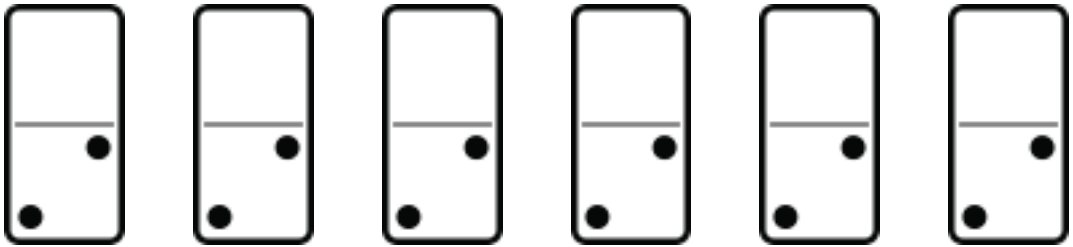
There are \_\_\_\_\_ points on each stone.

There are \_\_\_\_\_ points altogether.

# Answers

Look at the pictures and complete the multiplication sentences

1)




There are 5 domino stones

There are 2 points on each stone.

There are 10 points altogether.

2)

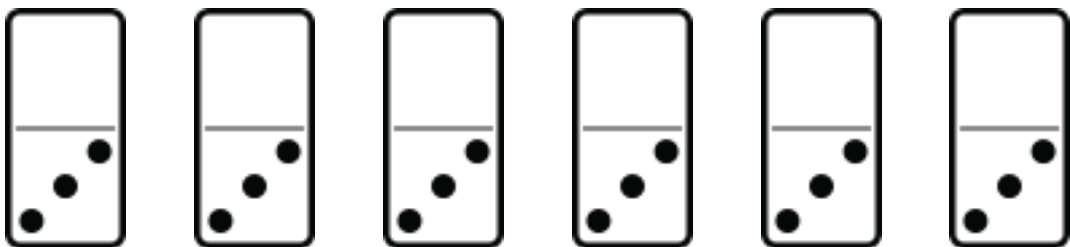


There are 5 domino stones

There are 4 points on each stone.

There are 20 points altogether.

3)



There are 6 domino stones

There are 3 points on each stone.

There are 18 points altogether.