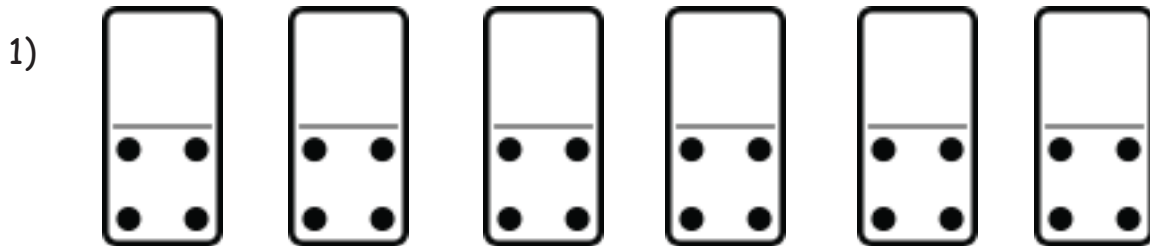


Domino Stones

Name: _____ Class: _____

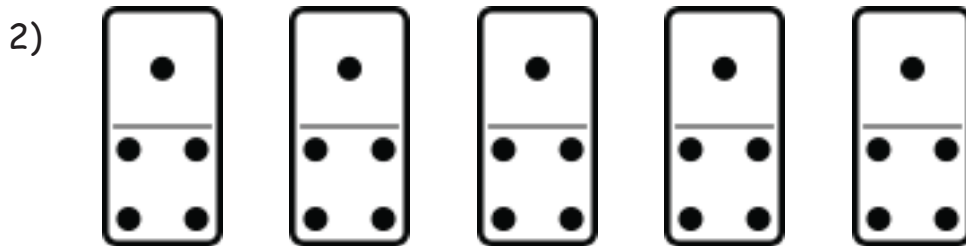
Look at the pictures and complete the multiplication sentences



There are _____ domino stones

There are _____ points on each stone.

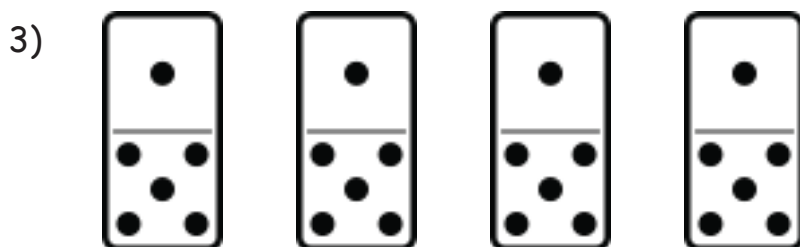
There are _____ points altogether.



There are _____ domino stones

There are _____ points on each stone.

There are _____ points altogether.



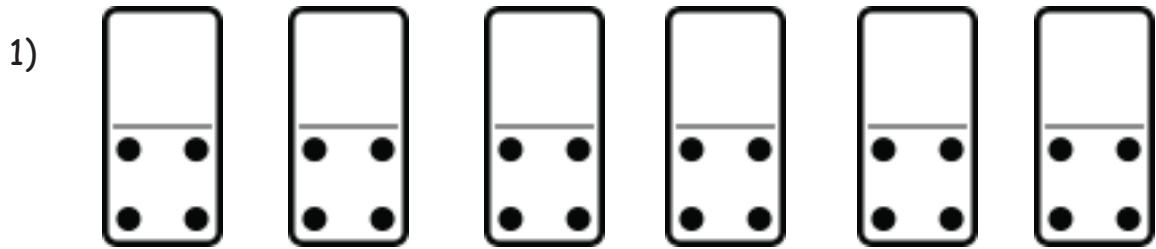
There are _____ domino stones

There are _____ points on each stone.

There are _____ points altogether.

Answers

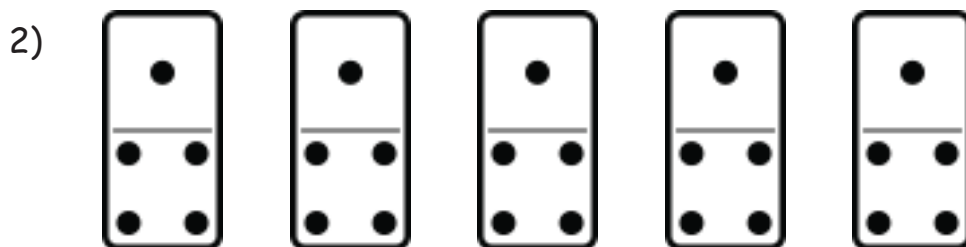
Look at the pictures and complete the multiplication sentences



There are 6 domino stones

There are 4 points on each stone.

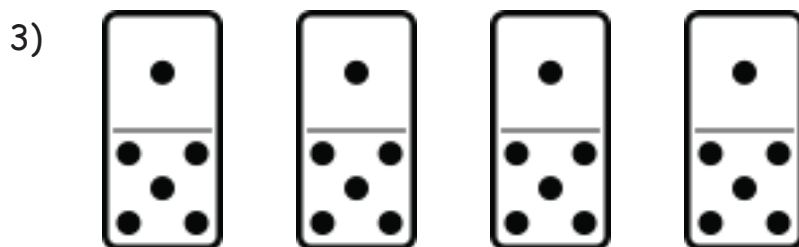
There are 24 points altogether.



There are 5 domino stones

There are 5 points on each stone.

There are 25 points altogether.



There are 4 domino stones

There are 6 points on each stone.

There are 24 points altogether.