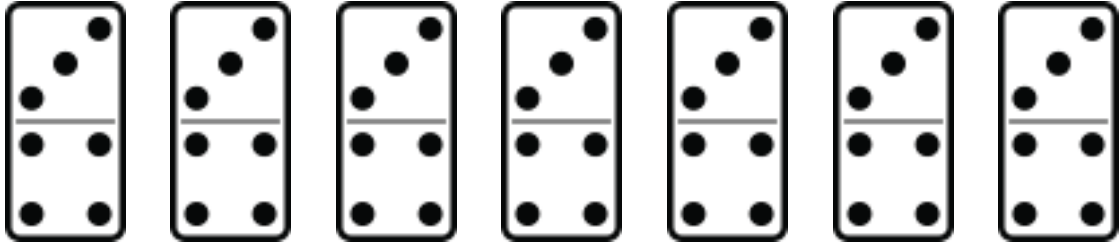


Domino Stones

Name: _____ Class: _____

Count the points on the domino stones and fill in the blanks.

1)

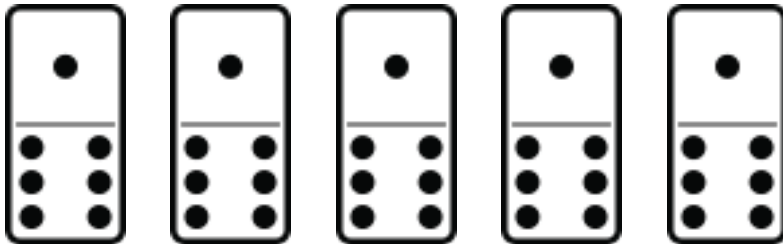


There are _____ domino stones

There are _____ points on each stone.

There are _____ points altogether.

2)

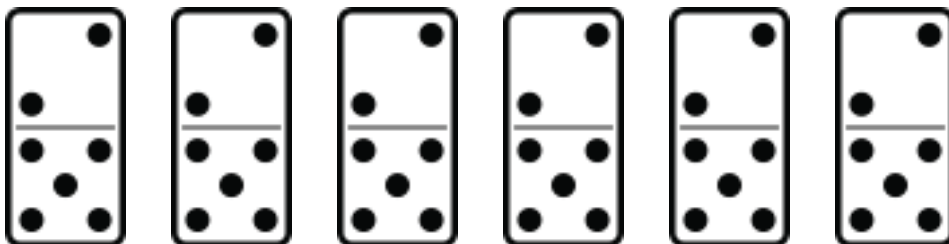


There are _____ domino stones

There are _____ points on each stone.

There are _____ points altogether.

3)



There are _____ domino stones


There are _____ points on each stone.

There are _____ points altogether.

Answers

Count the points on the domino stones and fill in the blanks.

1)

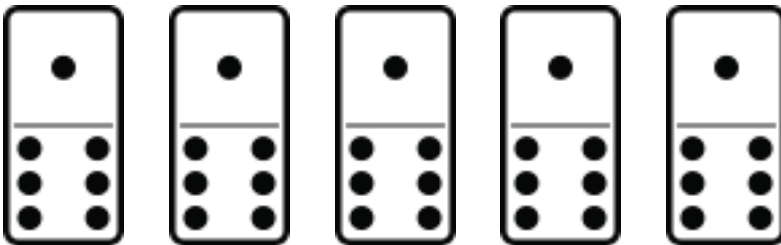


There are 7 domino stones

There are 7 points on each stone.

There are 49 points altogether.

2)




There are 5 domino stones

There are 7 points on each stone.

There are 35 points altogether.

3)



There are 6 domino stones

There are 7 points on each stone.

There are 42 points altogether.