


Domino Stones

Name: _____ Class: _____

Look at the domino stones and fill in the blanks.

1)

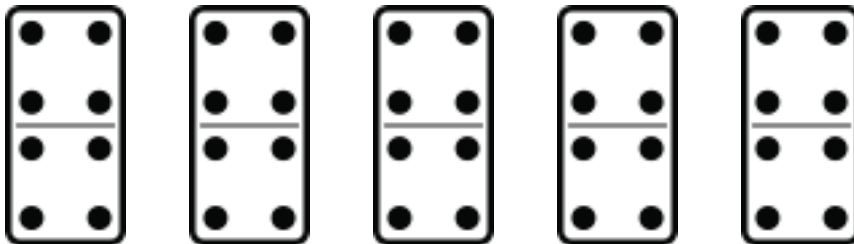


There are _____ domino stones

There are _____ points on each stone.

There are _____ points altogether.

2)

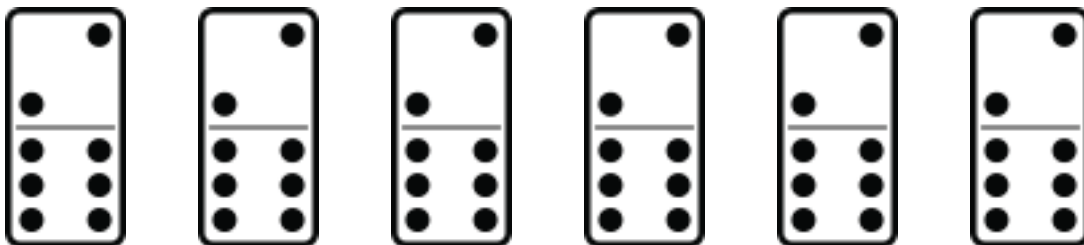


There are _____ domino stones

There are _____ points on each stone.

There are _____ points altogether.

3)



There are _____ domino stones


There are _____ points on each stone.

There are _____ points altogether.

Answers

Look at the domino stones and fill in the blanks.

1)

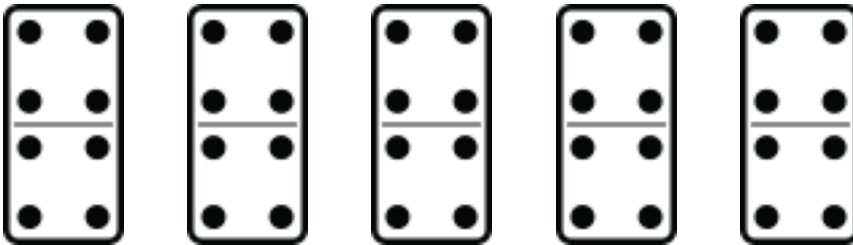


There are 4 domino stones

There are 8 points on each stone.

There are 32 points altogether.

2)

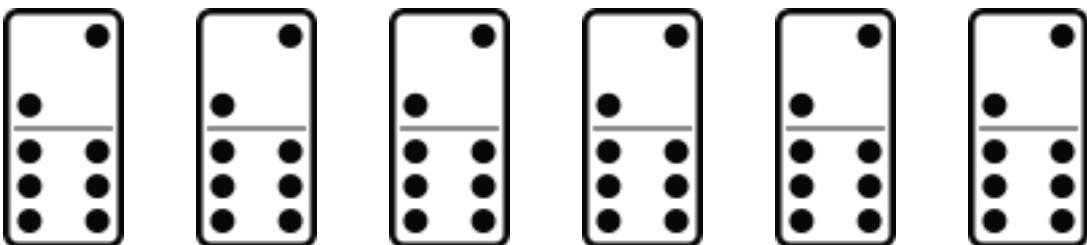


There are 5 domino stones

There are 8 points on each stone.

There are 40 points altogether.

3)



There are 6 domino stones

There are 8 points on each stone.

There are 48 points altogether.