


Equal Groups of Shapes

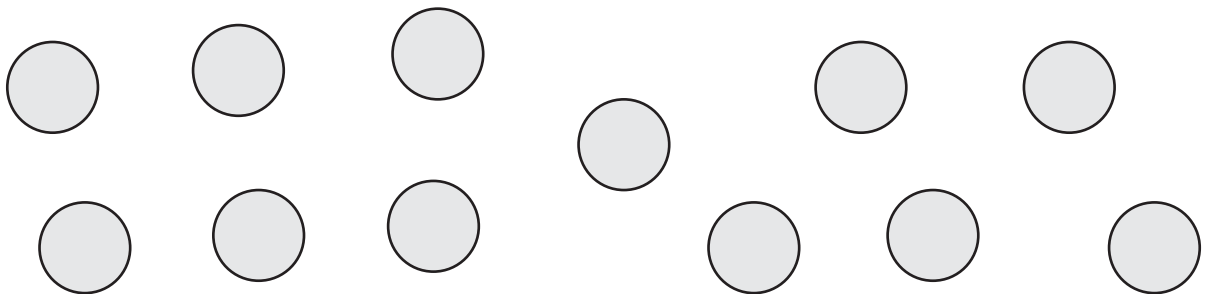
Name: _____ Class: _____

Look at the pictures and answer the questions



1. How many stars can you count altogether?

2. How many groups of 2 can you make out of this?




3. How many circles can you count altogether?

4. How many groups of 3 can you make out of this?

5. How many groups of 6 can you make out of this?

Answers

Look at the pictures and answer the questions

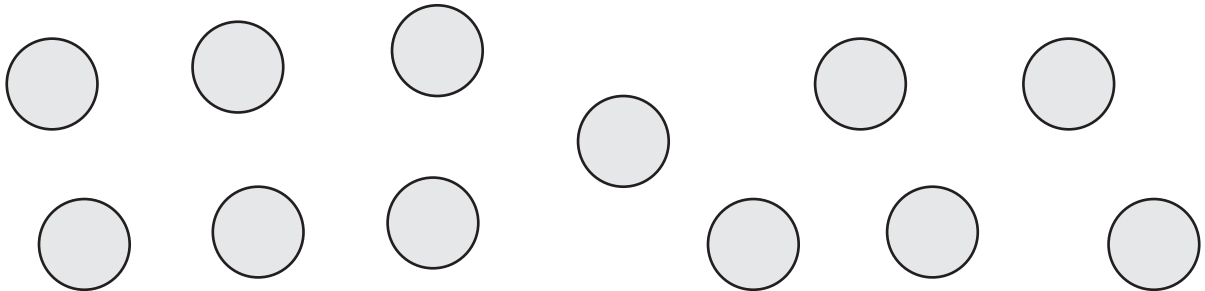


1. How many stars can you count altogether?

16 stars

2. How many groups of 2 can you make out of this?

8 groups



3. How many circles can you count altogether?

12 circles

4. How many groups of 3 can you make out of this?

4 groups

5. How many groups of 6 can you make out of this?

2 groups