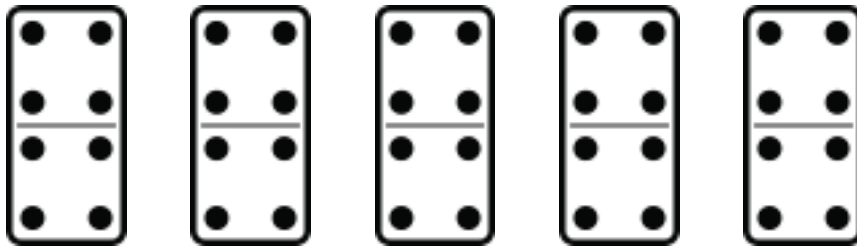



Equal Groups of Dots and Pips

Name: _____ Class: _____

Look at the pictures and answer the questions



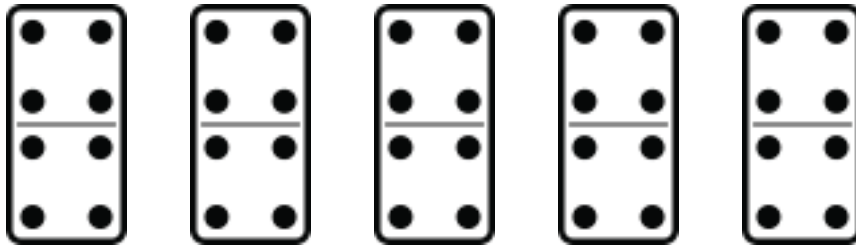
1. How many dots are there on these stones altogether?
2. How many groups of 4 can you make out of this?



3. How many pips are there on these dice altogether?
4. How many groups of 3 can you make out of this?
5. How many groups of 6 can you make out of this?

Answers

Look at the pictures and answer the questions




1. How many dots are there on these stones altogether?

40 dots

2. How many groups of 4 can you make out of this?

10 groups



3. How many pips are there on these dice altogether?

18 pips

4. How many groups of 3 can you make out of this?

6 groups

5. How many groups of 6 can you make out of this?

3 groups