

Multiplication Groups

Name: _____ Class: _____

Look at the pictures and complete the multiplication sentences

1)





There are _____ groups of carrots.

There are _____ carrots in each group.

There are _____ carrots altogether.

2)



There are _____ groups of apples.

There are _____ apples in each group.

There are _____ apples altogether.

3)



There are _____ groups of bananas.

There are _____ bananas in each group.

There are _____ bananas altogether.

Answers

Look at the pictures and complete the multiplication sentences

1)





There are 4 groups of carrots.

There are 3 carrots in each group.

There are 12 carrots altogether.

2)



There are 2 groups of apples.

There are 5 apples in each group.

There are 10 apples altogether.

3)



There are 3 groups of bananas.

There are 5 bananas in each group.

There are 15 bananas altogether.