


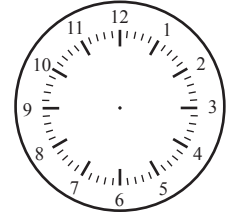
# Later/Earlier

Name: \_\_\_\_\_ Class: \_\_\_\_\_

Read the clock on the left, follow the instruction and draw the hands on the clock on the right side.



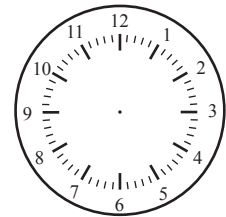
2 hours later



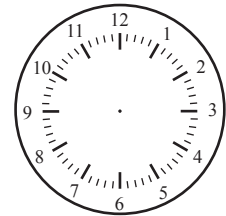
5:00



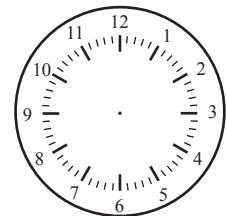
2 hours earlier



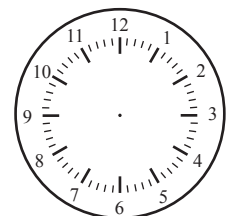
30 minutes earlier




2 hours later



30 minutes earlier




30 minutes later




# Answers

Read the clock on the left, follow the instruction and draw the hands on the clock on the right side.




2 hours later



5:00




2 hours earlier




2:00




30 minutes earlier




6:00




2 hours later




3:00




30 minutes earlier



8:30



30 minutes later



4:30