


# Match the Time

Name: \_\_\_\_\_ Class: \_\_\_\_\_


Read the clocks and match them to the correct time.




• 10:45




• 09:15




• 05:15



• 07:30







• 06:45



• 03:15

# Answers

Read the clocks and match them to the correct time.



10:45

09:15

05:15

07:30

06:45

03:15