
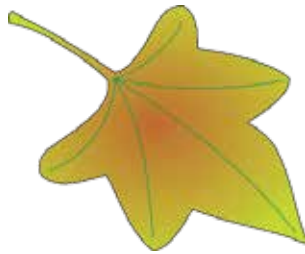
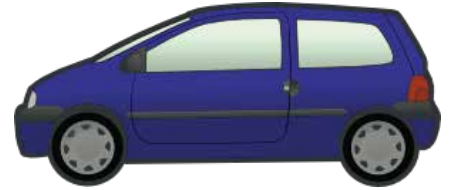


# Ordering Weight

Name: \_\_\_\_\_ Class: \_\_\_\_\_

Order the items in each row from 1 to 3. Use the 1 for the heaviest item and 3 for the lightest.



# Answers

Order the items in each row from 1 to 3. Use the 1 for the heaviest item and 3 for the lightest.



2



3



1



3



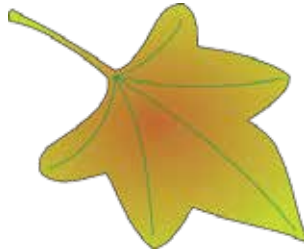
1



2




2



3



1



1



3



2