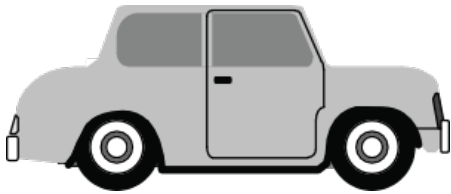



Ordering Weight

Name: _____ Class: _____

Order the items in each row from 1 to 3. Use the 1 for the heaviest item and 3 for the lightest.




Answers

Order the items in each row from 1 to 3. Use the 1 for the heaviest item and 3 for the lightest.



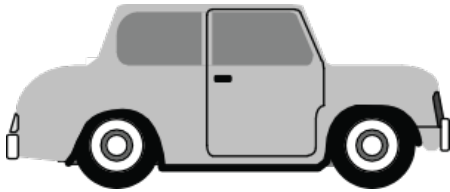
2



1



3



1



2



3



2



3



1



3



1



2