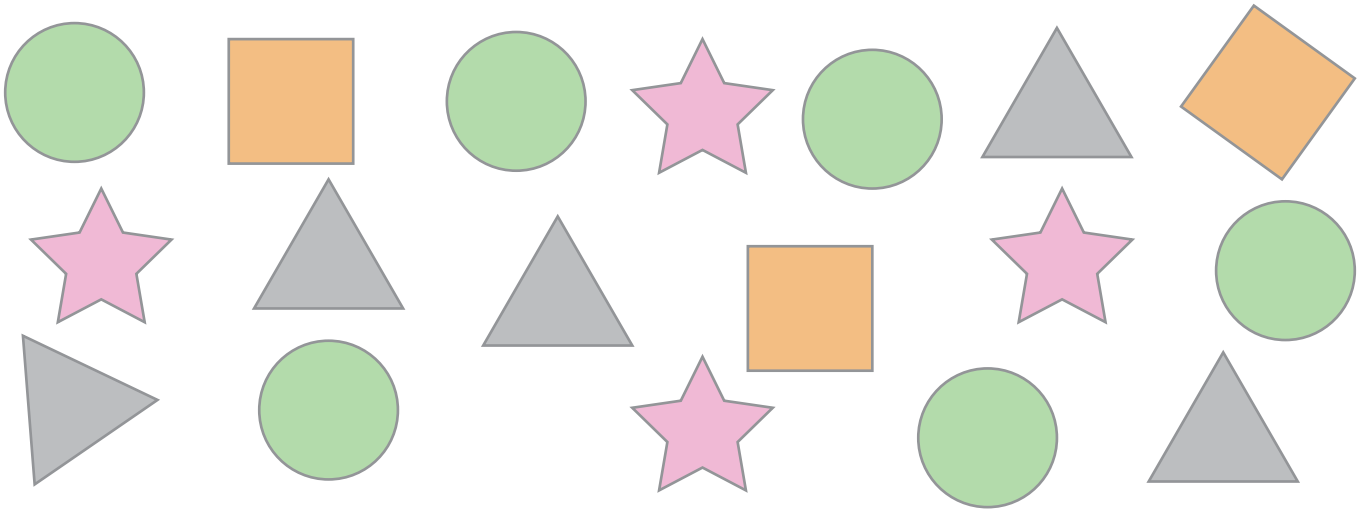




Shapes are everywhere

Name: _____ Score: _____

A teacher asked all the students in his class about their favorite shapes. The pictures below show the favorite shapes of the students. Use the information to answer the questions.



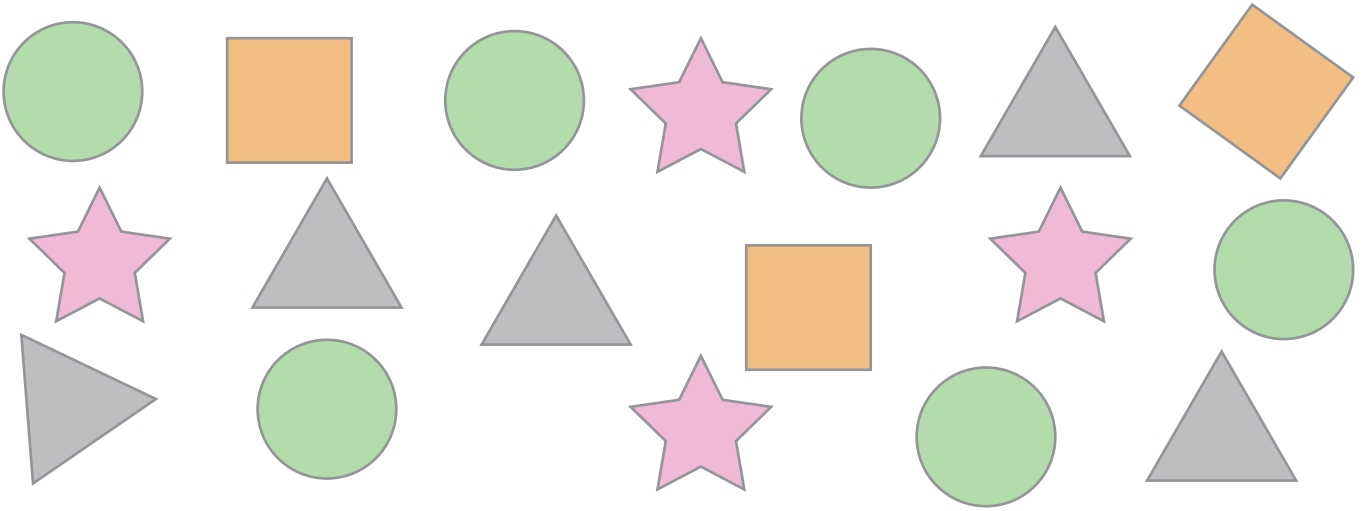
1) Complete the data table

3		6	4
			





- 2) How many students liked the triangle the most?
- 3) How many students preferred the star shape?
- 4) How many students liked the circle and the square the most?
- 5) How many students like the triangle and the star shape?
- 6) How many students are in this class?

Answers

A teacher asked all the students in his class about their favorite shapes. The pictures below show the favorite shapes of the students. Use the information to answer the questions.



1) Complete the data table

3	5	6	4
			

2) How many students liked the triangle the most?

6 students

3) How many students preferred the star shape?

4 students

4) How many students liked the circle and the square the most?

9 students

5) How many students like the triangle and the star shape?

9 students

6) How many students are in this class?

18 students