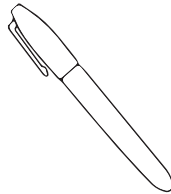


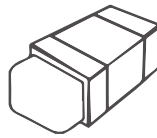
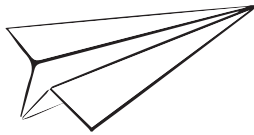




# Which is the heaviest?

Order the objects from heaviest (1) to lightest (3)



# Which is the heaviest?

Order the objects from heaviest (1) to lightest (3)



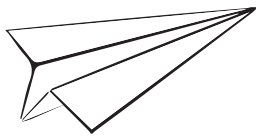
1



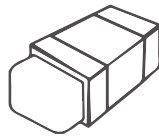
2




3




3



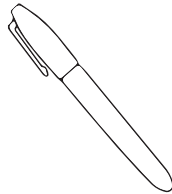
2



1



1



3



2



2



3



1



1



2



3