


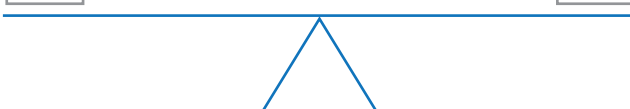
# Balancing scales

Circle the correct number to balance the scales

$$\square + 1 \qquad 10 - 4$$



5  
6

---

$$\square - 2 \qquad 8 - \square$$



4  
5

---

$$\square + 1 \qquad 5 - \square$$


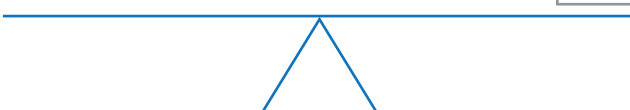
2  
4

---

$$\square - 1 \qquad 5 - \square$$


6  
3


---

$$8 + 1 \qquad 10 - \square$$


1  
2

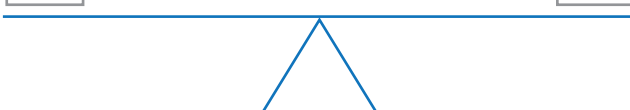
# Balancing scales

Circle the correct number to balance the scales

$$\boxed{5} + 1 \qquad 10 - 4$$



5  
 6

---

$$\boxed{5} - 2 \qquad 8 - \boxed{5}$$



4  
 5

---

$$\boxed{2} + 1 \qquad 5 - \boxed{2}$$



2  
 4

---

$$\boxed{3} - 1 \qquad 5 - \boxed{3}$$


6  
 3

---

$$8 + 1 \qquad 10 - \boxed{1}$$


1  
 2