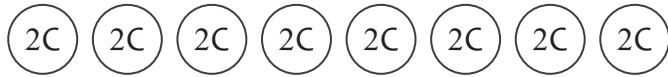
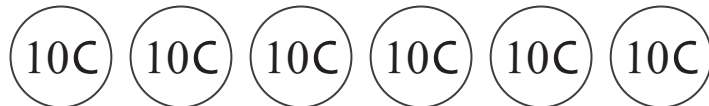
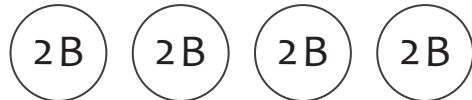


Counting money?

Count the coins, and write your answer in Euro cents

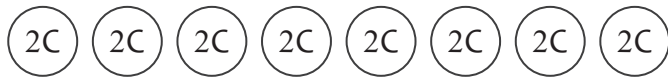


_____ cents



Counting money?

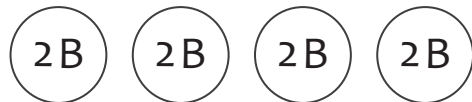
Count the coins, and write your answer in Euro cents



16 cents



50 cents



8 cents



60 cents



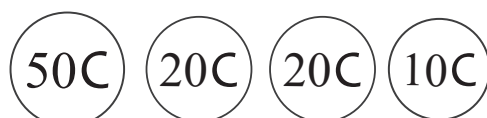
80 cents



100 cents



90 cents



100 cents