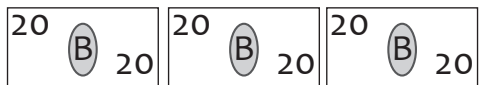
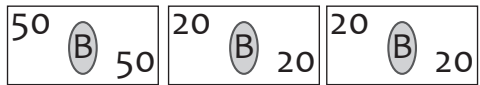


True or False

Are the following statements true (T) or false (F)?


 is the same as 60 Baht _____

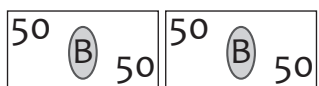
 is more than 100 Baht _____

 is less than 50 Baht _____

 is the same as 80 Baht _____


 is the same as 70 Baht _____

 is more than 50 Baht _____

 is more than 90 Baht _____

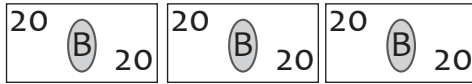
 is 50 Baht less than 100 Baht _____

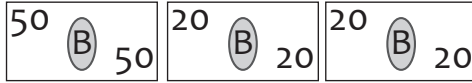
 is more than 80 Baht _____

 is the same as 70 Baht _____

True or False

Are the following statements true (T) or false (F)?


 is the same as 60 Baht T

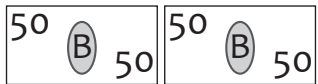
 is more than 100 Baht F

 is less than 50 Baht T

 is the same as 80 Baht F

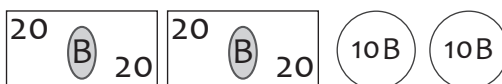
 is the same as 70 Baht T

 is more than 50 Baht F

 is more than 90 Baht T

 is 50 Baht less than 100 Baht T

 is more than 80 Baht T

 is the same as 70 Baht F