
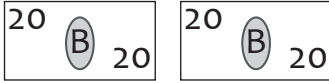

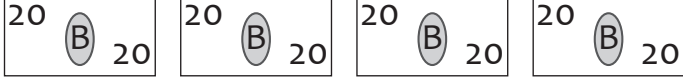


Money Pictograph

The pictograph shows the price of some items in a supermarket in Baht. Use the graph to answer the questions.

cheese	
apple	
milk	
bread	

Each  stands for 20 Baht

What is the price of the bread ?

How much does the milk cost ?


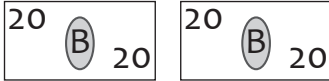

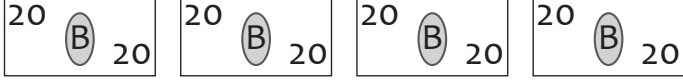
How much will you pay if you buy the apple and the milk ?

Which item is 20 Baht cheaper than the milk ?

If you have 100 Baht, can you buy the cheese ?

Money Pictograph

The pictograph shows the price of some items in a supermarket in Baht. Use the graph to answer the questions.

cheese	
apple	
milk	
bread	

Each  stands for 20 Baht

What is the price of the bread ?

80 Baht

How much does the milk cost ?

60 Baht

How much will you pay if you buy the apple and the milk ?

100 Baht

Which item is 20 Baht cheaper than the milk ?

The apple

If you have 100 Baht, can you buy the cheese ?

Yes
