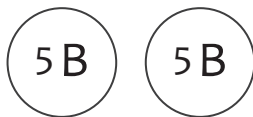

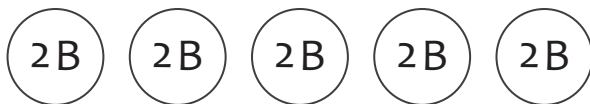
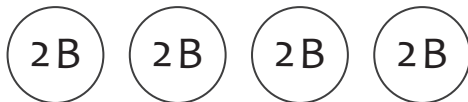


Counting money?

Count the coins, and write your answer in Baht



_____ Baht



Counting money?

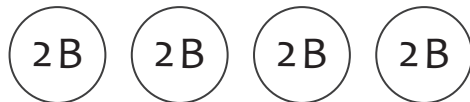
Count the coins, and write your answer in Baht



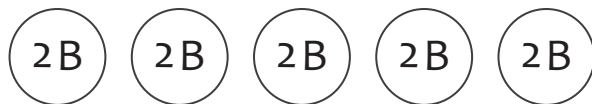
6 Baht



12 Baht



8 Baht



10 Baht



25 Baht



35 Baht



40 Baht



50 Baht