

How much money?

How much money is shown in each set? Write your answer in cents.

1¢ 1¢ 1¢ 1¢ 1¢ 1¢ 1¢

_____ cents

5¢ 5¢ 1¢ 1¢ 5¢ 1¢ 1¢

5¢ 10¢ 5¢ 5¢ 5¢ 5¢ 10¢

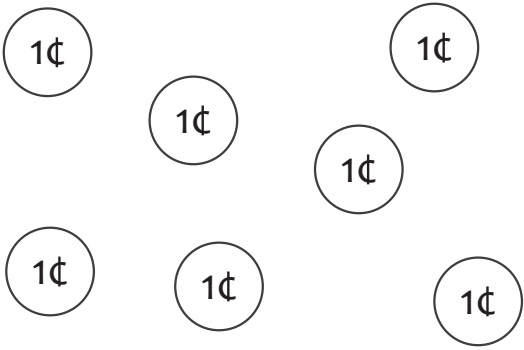
25¢ 10¢ 10¢ 10¢ 10¢ 10¢

25¢ 25¢ 5¢ 5¢ 25¢ 5¢ 5¢

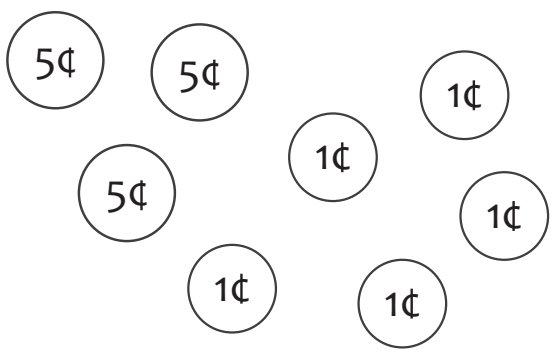
25¢ 25¢ 25¢ 10¢ 1¢ 1¢ 1¢ 1¢ 1¢ 10¢

How much money?

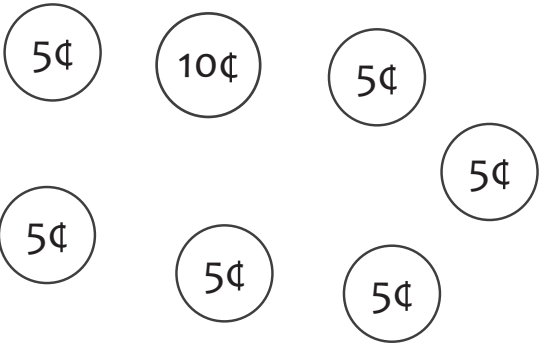
How much money is shown in each set? Write your answer in cents.



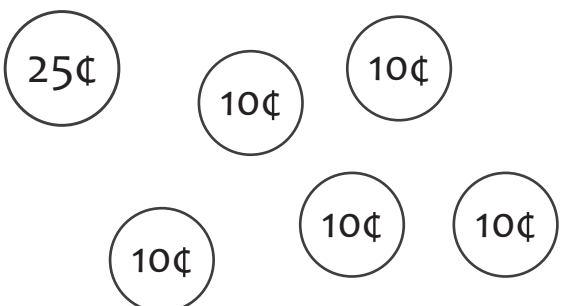
7 cents



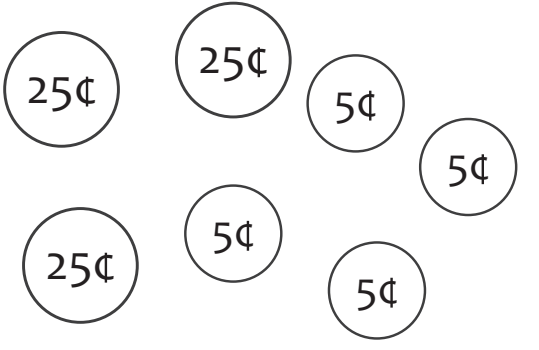
20 cents



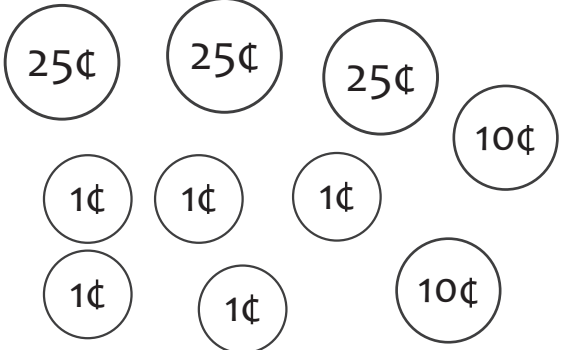
40 cents



75 cents



95 cents



100 cents