


True or False


Are the following statements true (T) or false (F)?


 is the same as 25 dollars _____

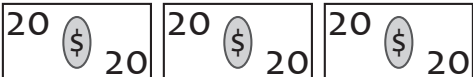
 is more than 60 dollars _____


 is less than 20 dollars _____

 is the same as 40 dollars _____

 is the same as 70 dollars _____

 is more than 50 dollars _____

 is more than 50 dollars _____


 is the same as 35 dollars _____

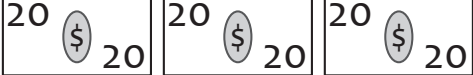
 is more than 80 dollars _____

 is the same as 70 dollars _____


True or False

Are the following statements true (T) or false (F)?

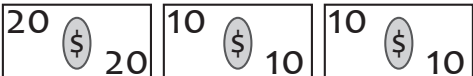
 is the same as 25 dollars T

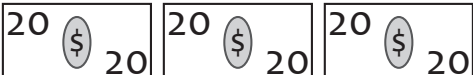
 is more than 60 dollars F


 is less than 20 dollars T

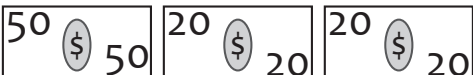
 is the same as 40 dollars F


 is the same as 70 dollars T

 is more than 50 dollars F

 is more than 50 dollars T

 is the same as 35 dollars T

 is more than 80 dollars T

 is the same as 70 dollars F