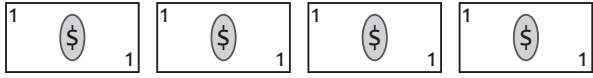
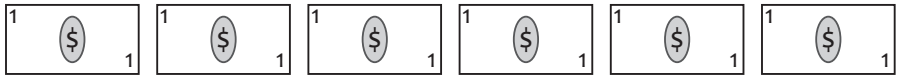




Money Pictograph

The pictograph shows the price of some items in a supermarket in dollars. Use the graph to answer the questions.

cheese	
shampoo	
cereals	
bread	

Each  stands for 1 dollar

What is the price of the bread ?

How much does the shampoo cost ?

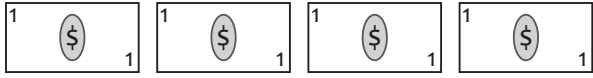
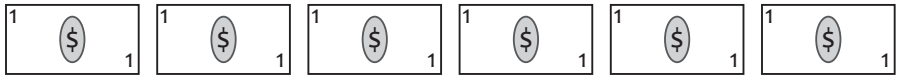


How much will you pay if you buy the cheese and cereals ?

Which item is 1 dollar cheaper than the cheese ?

If you have 18 dollars, can you buy all 4 items ?

Money Pictograph

The pictograph shows the price of some items in a supermarket in dollars. Use the graph to answer the questions.

cheese	
shampoo	
cereals	
bread	

Each  stands for 1 dollar

What is the price of the bread ?

3 dollars

How much does the shampoo cost ?

6 dollars

How much will you pay if you buy the cheese and cereals ?

9 dollars

Which item is 1 dollar cheaper than the cheese ?

The bread

If you have 18 dollars, can you buy all 4 items ?

Yes
