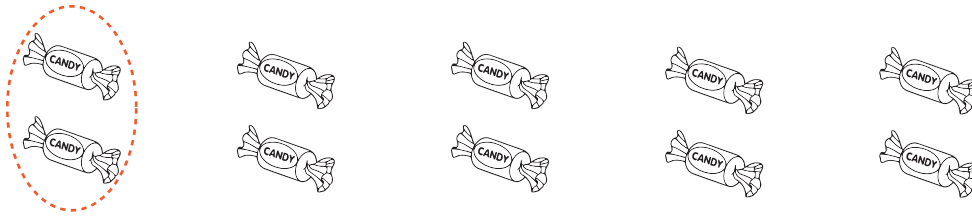


How many groups ?

Circle groups of 2 candies



How many candies are there in total ? _____

How many groups of 2 candies are there ? _____


Circle groups of 3 birds



How many birds are there in total ? _____

How many groups of 3 birds are there ? _____

Circle groups of 4 pencils

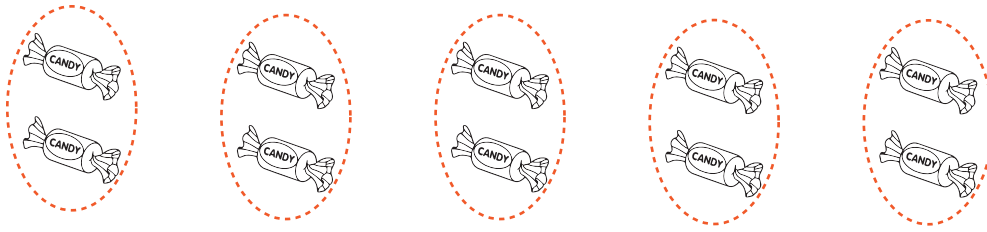


How many pencils are there in total ? _____

How many groups of 4 pencils are there ? _____

How many groups ?


Circle groups of 2 candies



How many candies are there in total ? 10

How many groups of 2 candies are there ? 5

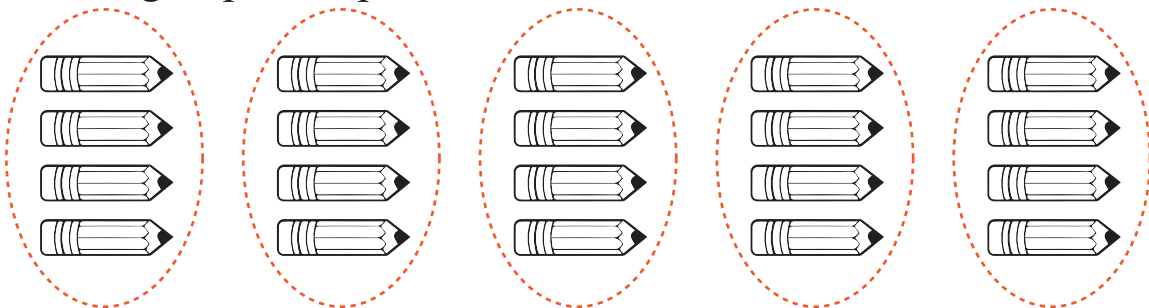
Circle groups of 3 birds



How many birds are there in total ? 9

How many groups of 3 birds are there ? 3

Circle groups of 4 pencils



How many pencils are there in total ? 20

How many groups of 4 pencils are there ? 5
