




Multiplication groups

Look at the pictures and fill in the blanks






There are groups of apples

There are apples altogether



There are groups of strawberries

There are strawberries altogether



There are groups of pineapples

There are pineapples altogether






There are groups of bananas

There are bananas altogether

Multiplication groups

Look at the pictures and fill in the blanks






There are groups of apples

There are apples altogether



There are groups of strawberries

There are strawberries altogether



There are groups of pineapples

There are pineapples altogether



There are groups of bananas

There are bananas altogether