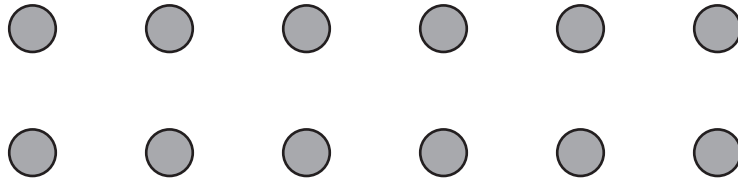


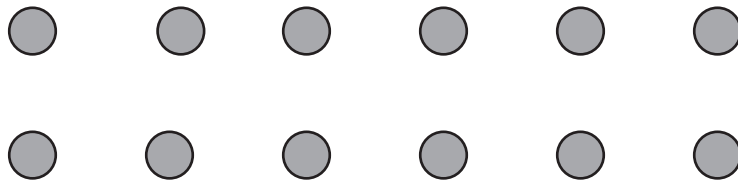
Making groups of 2, 3 and 6

Circle groups of dots to show your workings



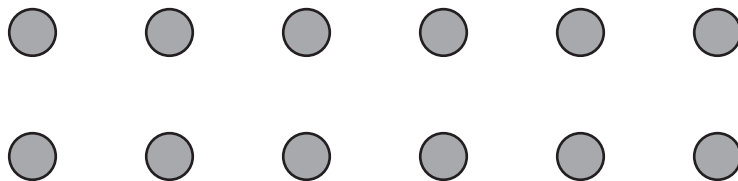
How many dots are there in total ? _____

How many groups of 2 dots can you make ? _____



How many dots are there in total ? _____

How many groups of 3 dots can you make ? _____

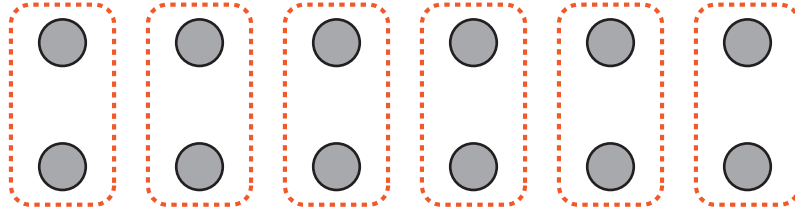


How many dots are there in total ? _____

How many groups of 6 dots can you make ? _____

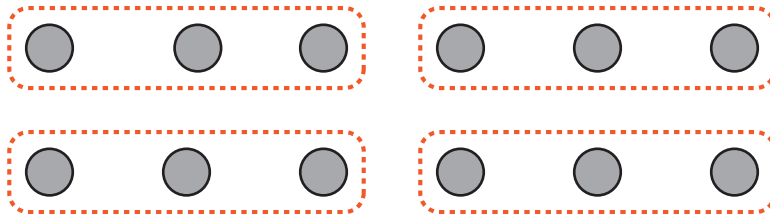
Making groups of 2, 3 and 6

Circle groups of dots to show your workings



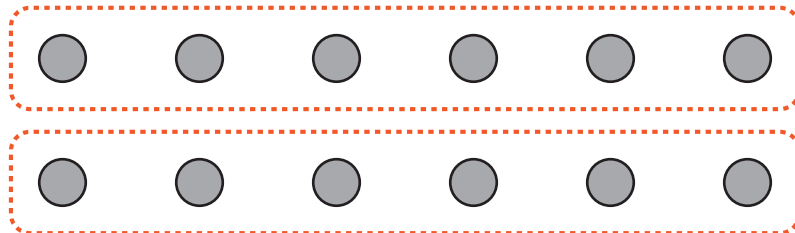
How many dots are there in total ? 12

How many groups of 2 dots can you make ? 6



How many dots are there in total ? 12

How many groups of 3 dots can you make ? 4



How many dots are there in total ? 12

How many groups of 6 dots can you make ? 2
