











Reading tally charts

Maria counted the vehicles passing by her house today and made a tally chart of it. Use the chart to answer the questions.

counted vehicles	tally marks
cars 	
bicycles 	
trucks 	
buses 	
tractors 	

How many buses passed by Maria's house ?

And how many bicycles ?






Which vehicle did she count the most ?

Which vehicle was counted the least ?

How many more cars than trucks passed by ?

Reading tally charts

Maria counted the vehicles passing by her house today and made a tally chart of it. Use the chart to answer the questions.

counted vehicles	tally marks
cars 	
bicycles 	
trucks 	
buses 	
tractors 	

How many buses passed by Maria's house ?

11 buses

And how many bicycles ?

15 bicycles

Which vehicle did she count the most ?

cars

Which vehicle was counted the least ?

tractors

How many more cars than trucks passed by ?

13 more cars