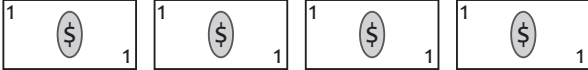
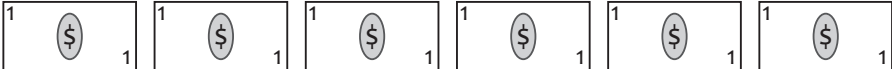




## Reading a pictograph

The pictograph shows the price of some items in a supermarket in dollars. Use the graph to answer the questions.

cheese	
shampoo	
cereals	
bread	

Each  stands for 1 dollar

What is the price of the bread ?

---

How much does the shampoo cost ?

---

How much will you pay if you buy the cheese and cereals ?

---

Which item is 1 dollar cheaper than the cheese ?

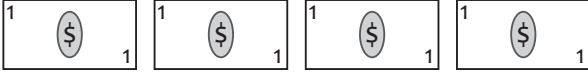
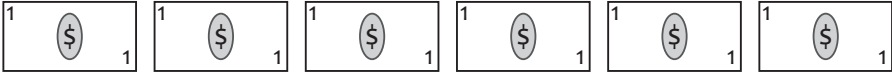


---

If you have 18 dollars, can you buy all 4 items ?

---

## Reading a pictograph

The pictograph shows the price of some items in a supermarket in dollars. Use the graph to answer the questions.

cheese	
shampoo	
cereals	
bread	

Each  stands for 1 dollar

What is the price of the bread ?

3 dollars

---

How much does the shampoo cost ?

6 dollars

---

How much will you pay if you buy the cheese and cereals ?

9 dollars

---

Which item is 1 dollar cheaper than the cheese ?

The bread

---

If you have 18 dollars, can you buy all 4 items ?

Yes

---