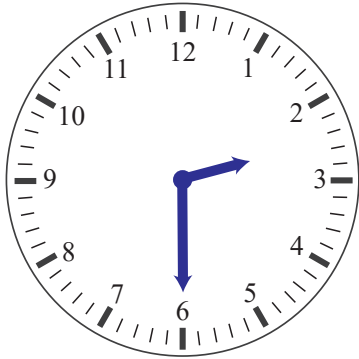


Telling time to the hour

Fill in the blanks, use *o' clock* and *half past*.

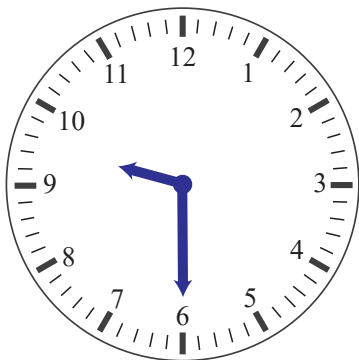


What time is it on the clock? _____

What time is it in 1 hour? _____

What time is it in 2 hours? _____

What time was it 1 hour ago? _____




What time is it on the clock? _____

What time is it in 1 hour? _____

What time is it in 3 hours? _____

What time was it 2 hours ago? _____




What time is it on the clock? _____

What time is it in 8 hours? _____

What time is it in half an hour? _____

What time was it half an hour ago? _____



What time is it on the clock? _____

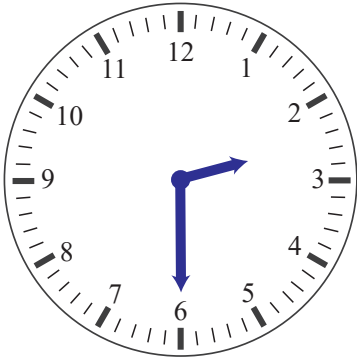
What time is it in half an hour? _____

What time is it in 12 hours? _____

What time was it 4 hours ago? _____

Telling time to the hour

Fill in the blanks, use *o' clock* and *half past*.

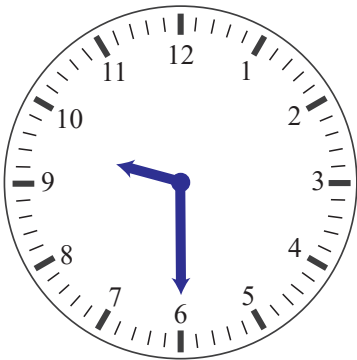


What time is it on the clock? half past 2

What time is it in 1 hour? half past 3

What time is it in 2 hours? half past 4

What time was it 1 hour ago? half past 1




What time is it on the clock? half past 9

What time is it in 1 hour? half past 10

What time is it in 3 hours? half past 12

What time was it 2 hours ago? half past 7



What time is it on the clock? 2 o' clock

What time is it in 8 hours? 10 o' clock

What time is it in half an hour? half past 2

What time was it half an hour ago? half past 1



What time is it on the clock? half past 3

What time is it in half an hour? 5 o' clock

What time is it in 12 hours? half past 4

What time was it 4 hours ago? half past 12